

SANT NIRANKARI PUBLIC SCHOOL, GOVINDPURI

SUMMER HOLIDAY HOMEWORK (2024-25)

CLASS IV



Dear Parents,

We wish you and your child a very happy summer holidays. It's time to enjoy and create a bond with family, friends and relatives. To utilize this time in the most constructive way we have prepared Holiday Homework for the students on the principle of 'learning by doing' for their holistic development.

Some important instructions:

- ❖ It's high time for all to be fit and active even by staying at home.
- ❖ Daily exercise is must for all.
- ❖ Eat healthy and avoid junk food.
- ❖ Avoid heavy and oily food and increase intake of fresh fruits and water to keep you well hydrated and energetic.
- ❖ Read newspaper daily to enhance your writing skills and vocabulary.
- ❖ The holiday homework carries marks.
- ❖ All the activities are to be done as instructed.

SANT NIRANKARI PUBLIC SCHOOL, GOVINDPURI

SUMMER HOLIDAY HOMEWORK (2024-25)

CLASS IV

Topic: 3-Dimensional Family Tree

Family is like a cozy shelter where we're surrounded by love and help whenever we need it. It's where we share laughs, wipe away tears, and make memories together. Each person in the family is special and adds something unique to the group. We stick together through good times and bad, supporting each other and making each other stronger. In our family, we find comfort, understanding, and a sense of belonging that helps us grow and reach for our dreams. No matter where life takes us, our family will always be there, holding us tight and loving us unconditionally.

ACTIVITY 1 (SUBJECT-EVS)



Make a 3-D Family Tree taking the above picture as reference.

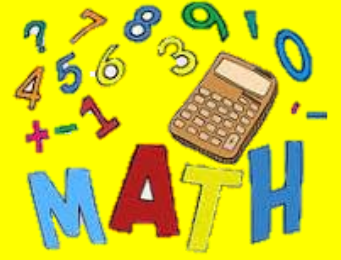
Materials Required: brown cardboard, green sheets, glue, scissors and photographs of your family member.

Tutorial: https://youtu.be/JJ_vG8bMm5U?si=KTxPMNFNwuFFg3_L

You may be as creative as you want with your tree and decorate it beautifully.

ACTIVITY 2 (SUBJECT-MATHS)

- Write the dates of birth of each member in your family.
- Arrange all the dates in ascending and descending order.
- Also, write the number names of each date of birth following Indian Numeration System. For example- 24 May 2024
24052024: 2,40,52,024 (two crore forty lakh fifty two thousand twenty four)




ACTIVITY 3 (SUBJECT-ENGLISH)

- Write two adjectives for each member of your family. (Each adjective needs to be different)
- Make sentences with each adjective you chose.



ACTIVITY 4 (SUBJECT-HINDI)

- अपने परिवार का एक सुंदर सा चित्र बनाएं और उसमें अच्छे से रंग भरें।
- "मेरा प्यारा परिवार" विषय पर 5 वाक्य लिखें।



Happy Holidays!

B. Fill in the blanks.

(1x2=2 marks)

- (i) The rain and the _____ makes the leaves come off the trees.
(ii) The boy wants to _____ his mom and dad.
-

SECTION - B (WRITING)

3. Write a paragraph on any one of the given topics

(5 marks)

'My Dream House' OR 'Pollution'

4. Attempt any 'one' of the following.

(5 marks)

(i) Write a letter to your uncle thanking him for the birthday present sent by him.

OR

(ii) Write a letter to your grandmother telling her about your new classmate.

SECTION – C (GRAMMAR)

5. Tick the correct answer .

(1x10=10 marks)

(i) 'Mr Raj is an accountant'. What type of sentence is it?

- (a) declarative (c) interrogative
(b) imperative (d) exclamatory

(ii) 'Please be quiet'. What does this imperative sentence imply?

- (a) curse (c) command
(b) advice (d) request

(iii) 'A _____ of lions' .Fill the collective noun.

- (a) gang (c) fleet
(b) team (d) pride

(iv) Abstract noun of friend is _____ .

- (a) friendship (c) friend hood
(b) friendly (d) friends

(v) Fill the correct article (if required).

i. She wants to sell _____ used car.

- (a) the (c) a
(b) an (d) no article

ii. _____ sun is a hot star.

- (a) The (c) A
(b) An (d) no article

(vi) The feminine gender of 'peacock' is

- (a) peahen (c) priestess
(b) lioness (d) poetess

(vii) A book is an example of _____ gender.

- (a) masculine (c) common
(b) feminine (d) neuter

(viii) The special name of any person , place, animal or thing is called the _____ noun.

- (a) common (c) abstract
(b) proper (d) collective

- (ix) 'The dark cave is a dangerous place'. What part of speech 'dangerous' is ?
(a) noun (c) adjective
(b) verb (d) pronoun

6. Circle the correct article in each sentence. (0.5x2= 1 mark)

- (i) I am an/a hour late.
(ii) The/A Whitehouse is in Washington D.C.

7. Fill in the blanks with personal pronouns given in the brackets. (1x2=2 marks)

- (i) May _____ have a long life! (it / you)
(ii) Ask _____. I don't know the right answer. (it /him)

8. Choose the correct adjective from the brackets to fill in the blanks. (1x2= 2 marks)

- (i) The bracelets are _____. (colorful /delicious)
(ii) This food tastes _____. (sour / polluted)

9. Choose the correct form of verbs from the brackets to fill in the blanks. (1x5= 5 marks)

- (i) My trousers _____ torn.(is/are)
(ii) The king and his sons _____ going hunting.(is/are)
(iii) Jai _____ the flute.(play/plays)
(iv) Somebody _____ left a bag on the chair.(has/have)
(v) The toy _____ broken.(is /are)

SECTION – D (LITERATURE)

10. Tick the correct answer. (1x5= 5 marks)

(i) Who was Amrita Devi ?

- (a) A labourer (b) A forest guard (c) A nature lover

(ii) The poem 'Snow Covered Mountains' is about the high mountains in:

- (a) Asia (b) Africa (c) Australia

(iii) How many people were killed by the king's soldiers?

- (a) One hundred and forty (b) Two hundred (c) Three hundred and sixty

(iv) What did Mary use to decorate the cage?

- (a) Fruits (b) Weeds (c) Flowers

(v) The tribesmen used _____ for self- defence.

- (a) guns (b) sligshot (c) arrows

11. Make sentences using the given words. (0.5x2=1mark)

- (i) delighted (ii) pretty

12. Answer these questions. (3x2=6marks)

- (i) How did Amrita Devi become famous?
(ii) What lesson did Mandela learn when he fell from a donkey?
(iii) What does the poet mean by the following lines give in the poem 'Snow Covered Mountains'?
Snow covered ranges and extreme climates,
Give a lot of kindness to plains.

संत निरंकारी पब्लिक विद्यालय गोविंदपुरी

ग्रीष्मकालीन प्रतिदर्श प्रश्न पत्र

सत्र 2024-2025

कक्षा- चौथी

समय 2 घंटा कुल

अंक-50

नाम _____ कक्षा _____ अनुक्रमांक _____

निर्देश: कार्यप्रपत्र को A4 शीट पर कीजिए ।

कार्य स्पष्ट एवं सुंदर लेख में करें ।

खंड 'अ'

प्रश्न 1. निम्नलिखित अपठित अंश को पढ़कर प्रश्नों के सही उत्तर दीजिए । (5)

किसी तालाब में एक बातूनी कछुआ रहता था। उसी तालाब के किनारे दो हंस भी रहते थे। वे तीनों आपस में मित्र थे। एक बार गरमी के मौसम में तालाब का पानी सूखने के कारण हंस दूसरे तालाब पर उड़कर जाने के लिए तैयार हो गए। कछुआ भी तैयार था, लेकिन उसे ले जाने की समस्या थी। कछुए ने उपाय बताया कि दोनों हंस अपनी चोंच में एक लकड़ी के सिरों को पकड़ लेंगे और वह उस लकड़ी को अपने मुँह से पकड़ लेगा, जिससे तीनों मित्र एक साथ एक ही तालाब पर रहेंगे। हंसों ने कहा कि उपाय तो अच्छा है, लेकिन बातूनी होने के कारण तुम रास्ते में बात न करने लगना नहीं तो तुम नीचे गिरकर मर जाओगे। कछुए ने कहा कि वह मूर्ख नहीं है वह अपने पैर पर स्वयं कुल्हाड़ी क्यों मारेगा? योजनानुसार वे उड़ गए। रास्ते में कुछ लोगों की बात सुनकर कछुआ बोल पड़ा और नीचे गिरकर अपनी जान खो बैठा। हमें कभी भी फालतू बातों में न पड़कर अपने लक्ष्य की तरफ ही ध्यान देना चाहिए।

अपठित गद्यांश पर आधारित प्रश्न

1. तीन मित्र कौन-कौन थे?

(क) दो हंस एक कछुआ (ख) कछुआ और हंस (ग) एक हंस (घ) एक कछुआ

2. किसे दूसरे तालाब में जाने की समस्या थी?

(क) हंसों को (ख) कछुए को (ग) लोगों को (घ) सभी को

3. तालाब सूख गया, क्योंकि:

(क) बहुत गरमी थी (ख) बहुत सरदी थी (ग) बहुत वर्षा थी (घ) उपर्युक्त में से कोई नहीं

4. हंसों ने कहा कि उपाय तो अच्छा है, पर:

(क) तुम बातूनी होने के कारण रास्ते में बात नहीं करना

(ख) तुम चालाक होने के कारण रास्ते में बात नहीं करना

(ग) तुम मूर्ख होने के कारण रास्ते में बात नहीं करना

(घ) तुम बुद्धिमान होने के कारण रास्ते में बात नहीं करना

5. अपने पैर पर स्वयं कुल्हाड़ी मारने का अर्थ है:

(क) अपना नुकसान स्वयं करना

(ख) अपना पफ़ायदा करना

(ग) अपना कार्य स्वयं करना

(घ) स्वयं कुल्हाड़ी मारना

प्रश्न 2. निम्नलिखित बहुवैकल्पिक प्रश्नों के सही उत्तर पर (✓) का निशान लगाओ। (8)

1. अपनी बात को बोलकर दूसरों तक पहुंचाना भाषा का _____ रूप कहलाता है।

(क) मौखिक (ख) लिखित (ग) लिपि

2. स्वरों के उच्चारण में वायु बिना किसी _____ के मुख से बाहर निकलती है।

(क) सहायता (ख) आसानी (ग) रुकावट

3. शब्द किसे कहते हैं ?

(क) विकारी (ख) एकार्थी (ग) स्वतंत्र और अर्थवान

4. 'नया' शब्द का पर्यायवाची शब्द है।

(क) नवीन (ख) निशा (ग) रवि

5. नीचे लिखे शब्दों के लिए एक शब्द चुने।

सप्ताह बात एक बार होने वाला _____

(क) दैनिक (ख) साप्ताहिक (ग) वैज्ञानिक

6. संज्ञा के मुख्य कितने भेद हैं ?

(क) सात (ख) तीन (ग) दो

7. रेखांकित शब्द के सही सर्वनाम हैं कौन सा है ?

महिमा क्या कर रही है ?

(क) पुरुषवाचक (ख) प्रश्नवाचक (ग) निश्चयवाचक

8. दिए गए विशेषण के सही विलोम शब्द चुनिए ।

अच्छा

(क) मोटा (ख) बुरा (ग) सख्त

प्रश्न 3. सही विकल्प के सामने (✓) का चिन्ह लगाओ ।

(8)

(i) धैर्य न छोड़ने के लिए कौन कहता है ?

क) बादल ख) फूल ग) धरती

(ii) सऊदी अरब में क्या नहीं है ?

क) नदी ख) पेड़ ग) तेल

(iii) सेठ क्या पकड़ कर परेशान खड़ा था ?

क) गोभी का बोरा ख) अंडो का टोकरा ग) तरबूजों का ठेला

(iv) चाह नहीं प्रेमी _____ में

क) छोटी ख) झाड़ी ग) माला

(v) सिपाही कैसे थे ?

क) दयालू ख) निर्दय ग) प्रजा पालक

(vi) पोंगल किस भाषा का शब्द है ?

क) पंजाबी ख) गुजराती ग) तमिल

(vii) सचिन दीवार पर क्या बनाना चाहता था ?

क) घोड़े ख) शेर ग) परियाँ

(viii) समय का _____ बस चला जाए

क) रात ख) घड़ी। ग) पहिया

प्रश्न 4. निम्नलिखित प्रश्नों के उत्तर एक शब्द में लिखिए ।

(3)

(i) समय क्या लूट कर कभी वापस नहीं आता ?

ii) झंडा किसने बनाया ?

iii) सागर क्या कहता है ?

प्रश्न 5. रिक्त स्थान भरिए ।

(3)

अर्जुन सिंह सूचना दामन

(क) सचिन को मुदित _____ पढ़ने लगे ।

(ख) जीवन में सफलता से _____ हैं भरते ।

(ग) बालक का नाम _____ था ।

प्रश्न 6. नीचे दिए गए शब्दों के अर्थ लिखिए ।

(3)

(क) दुलार -

(ख) भाग्य -

(ग) सहानुभूति -

प्रश्न 7. निम्नलिखित प्रश्न के उत्तर दीजिए

(4)

(क) धरती किसके साथ घूमती है ?

(ख) कन्या पोंगल की विशेषता बताइए ?

खंड (ब)

प्रश्न 7. निम्नलिखित प्रश्नों के उत्तर दीजिए ।

(4)

(क) विपुल की मम्मी को क्या चिंता हो गई ?

(ख) टी वी देखते समय हमें कौन सी बातें ध्यान में रखनी चाहिए ?

प्रश्न 8. किसी एक विषय पर अनुच्छेद लिखिए

(6)

‘ हम पिकनिक पर गए ’

या

मेरा प्रिय त्योहार

प्रश्न 9. अपने पिताजी को पत्र लिखकर अपनी पढ़ाई के विषय में बताइए ।


(6)

या

संवाद लेखन - डॉक्टर और मरीज़ के बीच हुई बातचीत

प्रश्न 10. नीचे दिए गए चित्र को देखकर उनका वर्णन अपने शब्दों में कीजिए ।

(6)



या

विज्ञापन: पेंसिल पर एक सुंदर व सचित्र विज्ञापन तैयार कीजिए

SANT NIRANKARI PUBLIC SCHOOL
SAMPLE PAPER (2024-25)
SUBJECT – MATHEMATICS
CLASS - IV

Time - 2 hrs

M.Marks -50

GENERAL INSTRUCTIONS:-

This paper is divided into three sections:

SECTION A : 30 MARKS

SECTION B : 8 MARKS

SECTION C : 12 MARKS

- Solve this sample paper on a separate A4 size ruled sheet.
- There should not be any overwriting or cutting.

SECTION A

Q.1. Fill in the blanks:-

[1 X 10 = 10 Marks]

- When we arrange the numerals from smallest to greatest, the order is known as _____ order.
- Roman numerals had no symbol for _____.
- _____ + 0 = 9888
- The answer of an addition operation is _____.
- 10000 - _____ = 9999.
- 607 x 1 = _____
- 8946 x _____ = 8946.
- The product of number 0 with any number is _____.
- _____ = Divisor x Quotient + Remainder
- Every number is a multiple of _____.

Q.2. Choose the correct option from the given brackets:-

[1 X 10 = 10 Marks]

- The successor of the greatest 4- digit number is _____
a.1,00,000 b.10,000 c.100
- 191 + 347 + 963 = _____ + 191 + 963
a.963 b.347 c. 589
- _____ - 0 = 49180
a.0 b.49180 c.1
- Which of the following has 5 as a factor?
a.25 b.54 c.36
- A whole number exactly divisible by 2 is called an _____ number.
a. odd b. prime c.even

vi. $770 \div 7 =$ _____

a.11

b.110

c.101

vii. The number left after completing the process of division is called the _____.

a. Quotient

b. remainder

c. dividend

viii. In Subtraction problem, the larger number from which another number is subtracted is called _____

a. Subtrahend

b. minuend

c. difference

ix. $929 \times 100 =$ _____

a. 9290

b. 92900

c. 929000

x. LCM refers to _____

a. least common multiple

b. low common multiple

c. lowest common multiple

Q.3. Match the following:-

[1 X 5 = 5 Marks]

Column A

Column B

a) 1 Million

i. 500

b) $811 + 9$

ii. 365

c) $575 - 75$

iii. Odd numbers

d) 365×1

iv. 10 lakhs

e) 3,5,7,9

v. 820

Q.4. State whether the following are True or False:-

[1 X 5 = 5 Marks]

- i. 10000 is the smallest 6-digit number. _____
- ii. The place value and face value of zero is always zero. _____
- iii. The numbers being added are called addends. _____
- iv. The result which we get after subtraction is called the difference. _____
- v. The remainder is always less than the divisor. _____

SECTION B

Q.5. Solve the following :-

[2 x 4 = 8 Marks]

i. Find the sum of 13345 and 7454.

ii. Find the difference: Minuend = 25677 and Subtrahend = 12790

iii. Mr Kapoor withdraws Rs 45000, Rs 24500 and Rs 15500 from the bank on three successive days. How much money does he withdraw from the bank?

iv. Subtract 5479 from 8256

SECTION C

Q.6.Solve the following questions :-

[3 x 4 = 12 Marks]

i. Answer the following: 8,06,245 — a. Write in expanded form
b. Place value of digit 6
c. Write the given number in words

ii. Divide $17,498 \div 13$ and find the quotient and remainder.

iii. Find the HCF of 24 and 40.

iv. Case Study- Maniratnam is the cashier of King Midas. His job is to find out the salary of all the people who work for the king. The chart below shows the salary of the workers they get each day.

Workers	Salary in a day
Minister	Rs 195
Horse rider	Rs 75
Cook	Rs 65

Calculate the salary of the workers for the month of May.

SANT NIRANKARI PUBLIC SCHOOL, GOVINDPURI
SAMPLE PAPER (2024-25)
CLASS-IV
SUBJECT – EVS

Time – 2 hrs

M.M- 50 Marks

General Instructions:

- Read the question paper carefully.
- Solve the sample paper on a separate A4 sized ruled sheet.

Section A - Objective

Q1. Choose the correct option-

(1x10=10 Marks)

- i. Perennial plants live for
 - a) one year
 - b) many years
 - c) two years
- ii. A family having parents, children, grandparents, aunts, uncles and cousins is called a
 - a) Joint Family
 - b) Extended family
 - c) Both
- iii. When do farmers in rural areas tend to their crops and animals?
 - a) At sunrise
 - b) at sunset
 - c) at noon
- iv. Chole Bhatura is a common dish of
 - a) South India
 - b) North India
 - c) East India
- v. Who handles paperwork, records and other important tasks to keep the school organised?
 - a) principal
 - b) support staff
 - c) administrative staff
- vi. Which family members share stories and their wisdom with children?
 - a) parents
 - b) grandparents
 - c) uncles & aunts
- vii. Which part of the plant includes vegetables like asparagus, celery, broccoli?
 - a) Roots
 - b) Stem
 - c) Flowers
- viii. What is a significant advantage of nuclear families?
 - a) built in support system
 - b) greater flexibility
 - c) shared responsibilities
- ix. Which is the most common method of purification of water that is used in most households?
 - a) Boiling
 - b) Sand filter
 - c) Charcoal filtration
- x. What is the primary purpose of using earthen pots for water storage in India?
 - a) To heat the water
 - b) to cool the water
 - c) to colour the water

Q2. Read the paragraph and choose the correct option-

(3x2=6 Marks)

A) Plants absorb water through their roots from the soil. This process is helped by tiny root hairs that increase the surface area for water uptake natural precipitation such as rainfall, provides water directly to plants. Rain water is absorbed through the soil and taken up by plant roots. In the absence of rain, plants use ground water by extending their roots deep down.

- i. From where does the plants absorb water?
 - a) Stem
 - b) Flowers
 - c) Roots

ii. Rainwater is absorbed through the _____.

- a) roots b) soil c) stem

iii. Name the process by which plants obtain water naturally.

- a) Precipitation b) Evaporation c) Condensation

B) Van Mahotsav is a special festival introduced by Shri K.M. Munshi in 1950. Van Mahotsav aims to promote afforestation, conservation of forests and the overall protection of the environment. It is a way to raise awareness about the importance of trees and forests in maintaining the ecological balance. It is celebrated from 1 to 5 July every year.

i. In which year Van Mahotsav celebration was started

- a) 1950 b) 2024 c) 1905

ii. Van Mahotsav festival was introduced by _____.

- a) Shri K. L. Munshi b) Shri K. M. Munshi c) Shri Ramnath Munshi

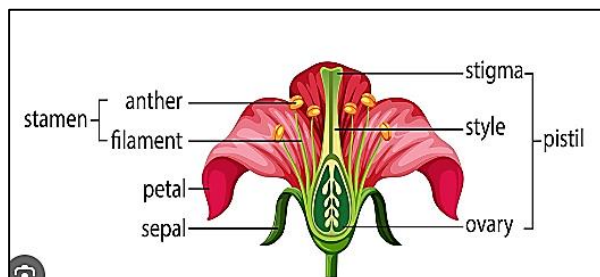
iii. In which month Van Mahotsav festival is celebrated.

- a) June b) January c) July

Q3. Identify the picture and answer the questions-

(2×2=4 Marks)

A)



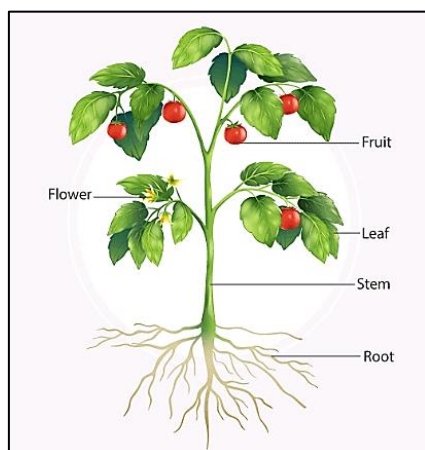
i. Identify the female reproductive part of a flower?

- a) Stamen b) Pistil c) Sepal

ii. Colourful leaf like structures that surrounds the reproductive organs are called _____.

- a) Sepals b) Petals c) Stamen

B)



i. Leaves are edible part in

- a) Cauliflower b) Cabbage c) Radish

ii. When you are eating sugarcane, you are eating the _____.

- a) Stem b) Branche c) Leaves

Q4. Fill in the blanks- **(1×3=3 Marks)**

- i. In nuclear families, you find parents and their _____.
- ii. The FIFO method stands for First-In, _____.
- iii. _____ are like friends within the family.

Q5. State True or False. **(1×3=3 Marks)**

- i. In a nuclear family, grandparents, aunts, uncles typically live together. ()
- ii. Cholera is not a water-borne disease. ()
- iii. Water is often referred to as the elixir of life. ()

Q6. Match the following. **(1×4=4 Marks)**

- | | |
|-----------------------|-------------------------|
| i. Cauliflower | National festival |
| ii. Socialising | built in support system |
| iii. Independence Day | Sunset |
| iv. Joint family | Edible flower bud |

Section B - Subjective

Q7. Define **(1×3=3 Marks)**

- i. Joint family ii. Rain water harvesting iii. Socialising

Q8. Answer the following questions in brief- **(2×4=8 Marks)**

- i. Why do we need to store water?
- ii. What is the function of sepals?
- iii. What is community?
- iv. Name some important rivers on India.

Q9. Answer the following questions in detail- **(3×3=9 Marks)**

- i. Describe the functions of the root.
- ii. Discuss any four methods to stop and control the wastage of food.
- iii. Discuss the causes and symptoms of any three water borne diseases.

**COMPUTER
CLASS IV**

SAMPLE PAPER

M.M-25

• Do your sample paper on A4 sheets.

Q1. Choose the correct answer-

6 Marks

- i. Which of the following actions include word processing?
a. Typing text b. Formatting text c. Deleting text d. All of these
- ii. We can work with files and folders using which of the following tools.
a. This PC b. File Explorer c. Both a and b d. Recycle Bin
- iii. Which of the following is a still image or solid color on a computer desktop?
a. Theme b. Wallpaper c. Screen saver d. Locked screen
- iv. Double clicking with mouse does which of the following?
a. Opens folder b. Opens file c. Runs a program d. All of these
- v. Which of the following is/are opened by a tab in Word?
a. Commands b. Ribbon c. Menus d. Options
- iv. what do the settings bold, italics, underline refer to?
a. Fonts b. Style c. Case d. None of these

Q2. Fill in the blanks-

7 Marks

- i. A _____ is a pre-defined combination of all personalization settings.
- ii. _____ help us to organize our files and data.
- iii. Tabs in Word are found below _____.
- iv. The default font case is _____ case.
- v. Combination of audio, text and video is called _____.
- vi. Preloaded designs in PowerPoint are called _____.
- vii. _____ is an example of a font.

Q3. Write T for true and F for false in front of the following statements-

4 Marks

- i. We cannot insert image in Word document. ()
- ii. As we type, text flows in multiple lines automatically in Word. ()
- iii. By default, Home tab is displayed in Word. ()
- iv. We can jump up to the previous page in Word using Page Up key. ()

Q4. Answer the following questions-

8 Marks

- i. What do you mean by justified text? How will you quickly justify the selected text?

- ii. What do you mean by digital presentation? Give 2 examples of presentation programs.

iii. Write 3 uses of MS Word.

iv. Write the steps to restore all the files from Recycle Bin.

ART INTEGRATED ACTIVITY PROJECT

Complete the project according to your Roll No.

- **Roll No. 1-19** – Make your own laptop showing desktop background. (For Reference)



- **Roll No. 20-38** – Make icons of **MS WORD, MS POWERPOINT, GOOGLE CHROME, INTERNET EXPLORER, MOZILLA FIREFOX.** (Use Cardboard for making these icons)

(For Reference)

