

SANT NIRANKARI PUBLIC SCHOOL, GOVINDPURI

SUMMER HOLIDAY HOMEWORK (2024-25)

CLASS III

Dear Parents,

We wish you and your child a very happy summer holidays. It's time to enjoy and create a bond with family, friends and relatives. To utilize this time in the most constructive way we have prepared Holiday Homework for the students on the principle of 'learning by doing' for their holistic development.

Some important instructions:

- ❖ It's high time for all to be fit and active even by staying at home.
- ❖ Daily exercise is must for all.
- ❖ Eat healthy and avoid junk food.
- ❖ Avoid heavy and oily food and increase intake of fresh fruits and water to keep you well hydrated and energetic.
- ❖ Read newspaper daily to enhance your writing skills and vocabulary.
- ❖ The holiday homework carries marks.
- ❖ All the activities are to be done as instructed.

Topic: 3- Mode of Transport

A means of transport helps in moving people and goods from one place to another. Transport enables trade between people, which is essential for the development of civilizations. Road transportation provides flexibility and accessibility. Water transport is the oldest and cheapest means of transport. Airways cover vast distances within a few hours. Transport plays an important part in economic growth and globalization.



ACTIVITY 1 (SUBJECT-EVS)

Make a model of any one transport taking the above picture as reference.

Materials Required: cardboard, sheets, glue, scissors and colours.

You may be as creative as you want with your transport and decorate it beautifully.

ACTIVITY 2 (SUBJECT-MATHS)

- Write the number of vehicles you have in your family.
- Write the distance between your school and home.
- Take a walk around your neighborhood and count how many cars, bicycles and pedestrians you see.

ACTIVITY 3 (SUBJECT-ENGLISH)

- Create a collage using pictures of different types of vehicles. Write 5 sentences about it.
- Write a paragraph on safety measures for vehicles.

ACTIVITY 4 (SUBJECT-HINDI)

अपने पसंदीदा परिवहनों के चित्र चिपकाए और नाम लिखें।

अपने पसंदीदा परिवहन के लाभ और हानियों का विवरण दें।



SANT NIRANKARI PUBLIC SCHOOL, GOVINDPURI
SAMPLE PAPER (2024-25)
SUB: ENGLISH
CLASS: III

TIME: 2 hrs.

M.M: 50

This paper has been divided into four sections.

SECTION A: READING - 8 MARKS

SECTION B: WRITING - 10 MARKS

SECTION C: GRAMMAR - 20 MARKS

SECTION D: LITERATURE - 12 MARKS

GENERAL INSTRUCTIONS:

- i) All questions are compulsory.
- ii) There should not be any overwriting or cutting.

SECTION-A (READING)

1. Read the following passage carefully.

Anand enjoyed gardening. He grew vegetables like tomatoes, spinach, and carrots. Anand watered the plants every day and removed the weeds. After the plants grew, Anand harvested fresh vegetables. He shared them with his friends, relatives and neighbours. Anand felt proud and happy of his hard work.

On the basis of your reading of the above passage, answer the questions.

Q. Tick the correct answer.

(1x4=4 marks)

i. Anand grew tomatoes, _____ and carrots in his garden.

- | | |
|-------------|-------------|
| (a) cabbage | (b) spinach |
| (c) potato | (d) radish |

ii. Anand _____ the plants every day to care for the plants.

- | | |
|-------------|------------|
| (a) removed | (b) cut |
| (c) watered | (d) shared |

iii. Whom did Anand share the vegetables with?

- (a) friends (b) neighbours
(c) relatives (d) all of them

iv. Write opposite word of 'Happy'.

- (a) joy (b) enjoy
(c) sad (d) end

2. Read the following lines carefully.

It I knew a box where the smiles are kept,
No matter how large the key
Or strong the bolt, I would try so hard,
It would open, I know, for me.
Then, over the land and sea broadcast,
I'd scatter the smiles to play,
That the children's faces might hold them fast
For many and many a day.

A. Choose the correct answer.

(1x2=2 marks)

(i) In the above lines, the rhyming word for 'play' is

- (a) land (b) day
(c) hard (d) scatter

(ii) The poet would scatter the _____ to play.

- (a) toys (b) bolt
(c) frowns (d) smiles

B. Fill in the blanks with correct words.

(1x2=2 marks)

(i) No matter how large the _____.

(ii) That the children's faces might hold them _____.

SECTION-B (WRITING)

3. Write a paragraph on any 'one' of the following topics.

(5 marks)

- (i) Rainy season
OR
(ii) My favourite animal

4. Attempt any 'one' of the following.

(5 marks)

(i) Write a letter to your friend asking him/her to attend your birthday party.

OR

(ii) Write a letter to your friend discussing about your hobby.

SECTION-C (GRAMMAR)

5. Tick the correct answer.

(1x10=10 marks)

i. Choose the 'adjective' in the following sentences.

(a)'The dog is hungry.'

- | | |
|----------|-------------|
| (i) dog | (ii) hungry |
| (iii) is | (iv) the |

(b) 'The food was delicious.'

- | | |
|-----------|----------------|
| (i) food | (ii) delicious |
| (iii) was | (iv) the |

ii. Fill in the blanks by choosing the appropriate 'pronoun'.

(a) Seems will sing at the function. _____ is a good dancer.

- | | |
|----------|-----------|
| (i) she | (ii) I |
| (iii) he | (iv) they |

(b)The frog and the monkey play together. _____ are good friends.

- | | |
|----------|-----------|
| (i) she | (ii) I |
| (iii) he | (iv) they |

iii. The female 'horse' is called _____

- | | |
|-------------|----------|
| (a) bull | (b) mare |
| (c) lioness | (d) cow |

iv. The female 'bull' is called

- | | |
|-------------|----------|
| (a) hen | (b) cow |
| (c) sparrow | (d) cock |

v. Choose the correct 'article' in the following sentences.

(a) My friend gave me _____ ice cream.

- | | |
|---------|----------|
| (i) an | (ii) on |
| (iii) a | (iv) the |

(b) I want ____ car.

- (i) an (ii) on
(iii) a (iv) the

(c) ____ book was very interesting.

- (i) an (ii) on
(iii) a (iv) the

vi. The 'question' for the sentence 'The puppy was hungry.' is

(a) Was the puppy hungry?

(b) The puppy was not hungry.

(c) The puppy is hungry.

(d) No, the puppy was not hungry.

6. Write an exclamatory word.

(1x2=2 Marks)

- i. You slip and fall. _____
ii. Your pet dies. _____

7. Circle the 'nouns' in the following sentences.

(1x2=2 Marks)

- i. Amit studies in my school.
ii. The lions caught the mice.

8. Fill in the blanks with 'singular' or 'plural' form.

(1x2=2 Marks)

- | Singular | Plural |
|-----------------|---------------|
| i. person | _____ |
| ii. _____ | children |

9. Fill in the blanks using collective noun.

(1x2=2 Marks)

- i. The _____ of wolves chased the deer.
ii. I lost my _____ of keys.

10. Rearrange the jumbled words to make meaningful sentences.

(1x2=2 Marks)

- i. shivam's january birthday is in
ii. science my is favourite subject

SECTION-D (LITERATURE)

11. Fill in the blanks using hints given below.

(1x4=4 Marks)

[Ira, planet, crowded, India]

- i. _____ father works in the mall.

- ii. Rock garden is a famous tourist spot in _____.
- iii. Earth is a _____.
- iv. It was Saturday, so the mall was _____.

12. Make sentences using the words given below.

(1x4=4 Marks)

- (i) Maze
- (ii) Mall
- (iii) Peace
- (iv) Earth

13. Answer these questions.

(1x4=4 Marks)

- i. What did Ira want to eat?
- ii. What are sculptures of Rock garden made of?
- iii. Who went to the Mall?
- iv. Write any one fact about Earth.

संत निरंकारी पब्लिक विद्यालय, गोविंदपुरी

ग्रीष्मकालीन प्रतिदर्श प्रश्न पत्र कीजिए

सत्र 2024-2025

कक्षा - तीसरी

समय: 2 घंटा

कुल अंक: 50

नाम _____

कक्षा _____

अनुक्रमांक _____

निर्देश: कार्यप्रपत्र को A4 शीट पर कीजिए |

कार्य स्पष्ट एवं सुंदर लेख में करें |

प्रश्न 1. निम्नलिखित अपठित अंश को पढ़कर प्रश्नों के सही उत्तर दीजिए |

(5)

बच्चों के लिए खेलना बहुत महत्वपूर्ण होता है। खेलने से उनका शारीरिक, मानसिक और सामाजिक विकास होता है। खेलने से बच्चे न केवल स्वस्थ रहते हैं, बल्कि उनका मन भी ताजगी से भर जाता है। वे साथ में खेलकर आत्मविश्वास भी पा लेते हैं। इसलिए, माता-पिता को अपने बच्चों को खेलने के लिए प्रोत्साहित करना चाहिए।

1. खेलने से क्या होता है?

क) शारीरिक, मानसिक और सामाजिक विकास

ख) स्वस्थ रहना

ग) बोरियत।

घ) अकेलापन

2. बच्चे क्या पाते हैं खेलकर?

क) रोग

ख) अशिक्षा

ग) आत्मविश्वास

घ) उदासी

3. माता-पिता को क्या करना चाहिए?

क) बच्चों को खेलने से रोकना

ख) बच्चों को खेलने के लिए प्रोत्साहित करना

ग) बच्चों को पढ़ाई में ही लगातार बिठाना

घ) बच्चों को सिर्फ घर पर ही बैठा रखना

4. खेलने का क्या महत्व है?

क) सिर्फ मनोरंजन का

ख) शारीरिक विकास का

ग) आराम करने का

घ) कोई नहीं

5. बच्चों के खेलने का अर्थ है:

क) शिक्षा को छोड़ देना

ख) सिर्फ मनोरंजन

ग) सिर्फ स्वास्थ्य की देखभाल

(घ) सभी विकास के क्षेत्र में उन्नति

प्रश्न 2. निम्नलिखित बहुवैकल्पिक प्रश्नों के सही उत्तर पर (✓) का निशान लगाओ ।

(8)

- i) पंजाबी भाषा की लिपि _____ है ।
क) रोमन ख) फ़ारसी ग) गुरुमुखी
- ii) ध्वनियां कितने प्रकार की होती हैं ?
क) 1 ख) 2 ग) 3
- iii) वाक्य किसके कथन को पूरी तरह से व्यक्त करता है
क) श्रोता ख) वक्ता ग) अर्थ
- iv) व्यक्ति, वस्तु, स्थान या भाव के नाम को कहते हैं ।
क) शब्द ख) संज्ञा ग) लिपि
- v) लिंग कितने प्रकार के होते हैं ?
क) दो ख) तीन ग) चार
- vi) आँख शब्द का सही वचन चुनिए ।
क) आँखें ख) चाबियाँ ग) चिड़ियाँ
- vii) जिन शब्दों का प्रयोग संज्ञा के स्थान पर किया जाता है _____ कहते हैं ।
क) विशेषण ख) सर्वनाम ग) पर्यायवाची
- viii) 'पीला कुत्ता भौंक रहा है ।' इस वाक्य में विशेषण शब्द कौन सा है ?
क) कुत्ता ख) पीला ग) भौंक

प्रश्न 3. सही विकल्प के सामने (✓) का चिन्ह लगाओ ।

(8)

(क) शब्द 'कौन' का समान तुक शब्द चुने।

अंधेरा मौन चला

(ख) किसकी पुस्तक खोई थी ?

पार्थ निधि रिया

(ग) गुड़िया ने किस रंग की चुनरी पहनी है ?

हरी नीली गुलाबी

(घ) कौन सी घटा मतवाली है ?

जमकर घनघोर बादल

(I) माँ ने विपुल के लिए क्या बनाया ?

चाँकलेट केक चाऊमीन फ्रूट केक

(च) टी वी आधुनिक समय में कैसा दिखता है ?

सुंदर मोटा बदसूरत

(छ) 'बाल दिवस' कब मनाया जाता है ?

2 अक्टूबर 14 नवंबर 5 सितंबर

(ज) हवाई जहाज किस रंग का था?

लाल हरा नीला

प्रश्न 4. निम्नलिखित प्रश्नों के उत्तर एक शब्द में दीजिए ।

(3)

(क) नभ क्या कहता है ?

(ख) कविता में किस ऋतु के बारे में बताया गया है ?

(ग) शेखचिल्ली किससे नहीं घबराता था ?

प्रश्न 5. रिक्त स्थान भरिए ।

(3)

7 पायलट बड़ा

(क) तब मेरा आकार बहुत _____ था ।

(ख) चिंकू ने खुद को _____ कहा ।

(ग) विपुल _____ वर्ष का हो गया ।

प्रश्न 6. नीचे दिए गए शब्दों के अर्थ लिखिए ।

(3)

(क) उपहार -

(ख) प्रकृति -

(ग) प्रसन्न -

प्रश्न 8. किसी एक विषय पर अनुच्छेद लिखिए

(6)

- मेरा घर और परिवार
- मेला

प्रश्न 9. अवकाश के लिए प्रधानाध्यापक को पत्र लिखिए ।

(5)

या

संवाद लेखन - दो दोस्तों के बीच हुई बातचीत


प्रश्न 10. चित्र को देखकर चार पंक्तियां लिखिए ।

(5)



या

साबुन पर एक सुंदर व सचित्र विज्ञापन तैयार कीजिए

- i) Fraction $\frac{45}{50}$ is
 i. proper ii. improper iii. none
- j) $1+2+3+4+5 =$ _____
 i. 15 ii. 20 iii. 30
- k) A solid which has one face is _____
 i. cube ii. square iii. sphere
- l) $25 \times 34 =$ _____
 i. 850 ii. 800 iii. 820
- m) The figure given is 
 i. open ii. Closed iii. none
- n) All four sides of a _____ are equal in length.
 i. square ii. rectangle iii. triangle
- o) _____ - 600 = 700
 i. 100 ii. 1300 iii. 50

2. Fill in the blanks.

[1 x 7 = 7 Marks]

- a) $0 \times 560 =$ _____
- b) A triangle has _____ sides.
- c) 200 more than 340 is _____.
- d) 140 less than 150 is _____.
- e) In like fractions, all the denominators are _____ (equal/unequal).
- f) $299 +$ _____ $= 300.$
- g) $\frac{7}{3}$ is a _____ fraction. (proper/improper)

3. Match the following.

[1 x 5 = 5 Marks]

- | | |
|--------------------------------|-------------------|
| a) $210 + 120$ | i) 1 |
| b) $900 - 600$ | ii) 4920 |
| c) smallest odd number | iii) 330 |
| d) 60×82 | iv) $\frac{2}{3}$ |
| e) $\frac{4}{3} - \frac{2}{3}$ | v) 300 |

4. Case Study

[1 x 3 = 3 Marks]

Rohan received ₹1000 as his pocket money from his parents. Out of this money, he spent ₹200 to buy a new shirt, ₹30 to buy new pencils and ₹100 to buy some snacks.

- a) Money left with Rohan after he bought a new shirt = ₹ _____
b) Money left with Rohan after he bought pencils = ₹ _____
c) Money left with Rohan at the end = ₹ _____



SECTION – B

[2 x 4 = 8 Marks]

5. Find the sum.

430, 789, 1230

6. Find the product.

67 and 900

7. Subtract the following:

874 from 1000

8. Make lines of symmetry:



SECTION-C

[3 x 4 = 12 Marks]

9. Circle the smallest number in each of the following:

- i. 3450, 3504, 3405
ii. 8650, 2500, 2550
iii. 4848, 4884, 4840

10. Asha had 234 candies. She further received 321 candies from her mother and 158 candies from her father. How many candies did she have in all?

11. Rohan bought 4 shirts for ₹420 each. How much total amount did he spend?

12. Arrange the following fractions in ascending order in each of the following:

i. $\frac{2}{5}, \frac{2}{3}, \frac{2}{4}, \frac{2}{10}$

ii. $\frac{33}{40}, \frac{32}{40}, \frac{29}{40}, \frac{27}{40}$

SANT NIRANKARI PUBLIC SCHOOL, GOVINDPURI
SAMPLE PAPER (2024-25)
CLASS-III
SUBJECT - EVS

Time: 2 hours

M.M- 50 marks

General Instructions:

- Read the question paper carefully
- Solve the sample paper on A 4 sized rules sheets.
- The paper is divided into two sections A and B
- Both the sections are compulsory

SECTION A - OBJECTIVE

Q1. Choose the correct option.

(1x10=10 Marks)

- i. Which part of the plant makes food?
a) roots b) leaves c) stem
- ii. Animals and humans depend on plants for
a)Oxygen b) Food c) Both
- iii. Number of bones present in our body are
a) 106 b) 206 c) 600
- iv. What all does a seed need to germinate?
a) Water b) air c) both
- v. Kutcha houses are made up of
a) cement b) steel c) mud
- vi. Plants need humans and animals for
a) carbon dioxide b) oxygen c) Water
- vii. A model of the earth is called
a) atlas b) map c) globe
- viii. Which of the following is not a mode of transport?
a) apartment b) bus c) scooter
- ix. Which of the following are used to commute from one place to another?
a) smartphone b) scooters c) email
- x. Which of these vehicles are not used in rural areas?
a) boats b) tractors c) bullock carts

Q2. Read the paragraph and choose the correct option.

(3×2=6 Marks)

A) Just like a room is made up of bricks, our body is also made up of very tiny building blocks called cells. The cells are so small that we can see them only through a microscope. Many similar cells join to form tissues. Many tissues combine to form organs.

- i. Our body is made up of tiny building blocks called
a) cells b) tissues c) organs

- ii. Cells combine to form
 - a) organs
 - b) tissues
 - c) none
- iii. We can only see cells under
 - a) our skin
 - b) a microscope
 - c) our mouth

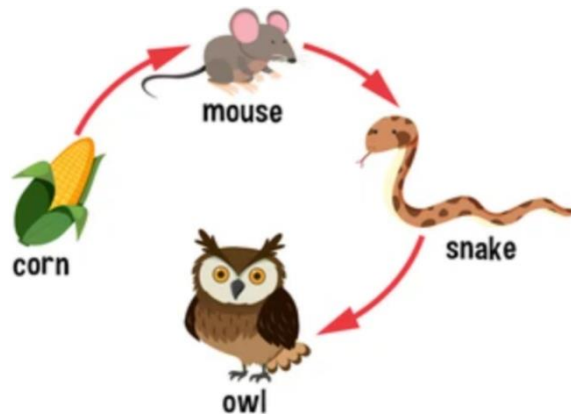
B) In cities, we usually use cycles, cars, scooters, motorcycles, buses, trucks, etc. Most of these vehicles run on fuels like petrol, diesel and LPG or CNG. Nowadays, electric cars are also being used. These are environment friendly and cause very less pollution.

- i. Give two examples of vehicles used in cities.
- ii. Most vehicles run on fuels like petrol, diesel, LPG or _____.
- iii. Electric cars cause very less _____.

Q3. Identify the picture and answer the questions.

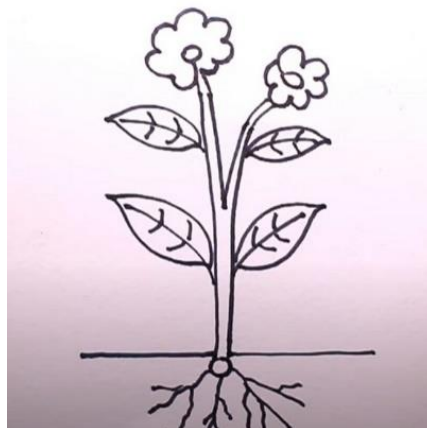
(2×2=4 Marks)

A)



- i. What does this picture depict?
 - a) Food chain
 - b) plants
 - c) animals
- ii. In this food chain, the mouse is eating the
 - a) owl
 - b) snake
 - c) corn

B)



- i. Identify this picture, it's a _____.
 - a) Tree
 - b) Plant
 - c) None
- ii. Plants make their own _____.
 - a) Food
 - b) water
 - c) air

Q4. Fill in the blanks-**(1×3=3 Marks)**

- i. The _____ in the mouth makes the food soft.
- ii. _____ take care of passengers on aeroplanes.
- iii. Children of your aunts and cousins are your _____.

Q5. State True or False.**(1×3=3 Marks)**

- i. Even today, many people use cycles for commuting. ()
- ii. Concrete is a mixture of cement, sand, gravel and water. ()
- iii. Atlas is a model of the Earth. ()

Q6. Match the following.**(1×4=4 Marks)**

- | | |
|-----------------|---------------------------------|
| i. Atlas | a. sister of your mother/father |
| ii. Pucca house | b. photosynthesis |
| iii. Aunts | c. permanent house |
| iv. leaves | d. book of maps |

SECTION B - SUBJECTIVE**Q7. Define****(1×3=3 Marks)**

- i. Organ system ii. Kutcha house iii. Pollution

Q8. Answer the following questions in brief-**(2×4=8 Marks)**

- i. Why do people prefer maps over globes?
- ii. Mention any one ritual followed in your family.
- iii. What is a tissue?
- iv. Name the Wright brothers.

Q9. Answer the following questions in detail-**(3×3=9 Marks)**

- i. How are herbs different from shrubs.
- ii. List how plants depend on animals and humans.
- iii. Give any three reasons why a shelter is important.

COMPUTER

CLASS III

Sample paper

mm-25

□ **Do your sample paper on A4 sheets and make a folder.**

Q1. Fill in the blanks. (8)

- I. The game you play on your computer, is an example of _____.
- II. _____ is a part of CPU that passes the data and information to ALU or CU.
- III. _____ device generates the final result to the user.
- IV. The process of the instruction is done by the _____ on a computer.
- V. The process of placing programs or apps on the taskbar is called _____ a program.
- VI. _____ area provides status and notifications about things like incoming email, updates, etc.
- VII. _____ interacts with the operating system by typing commands with the help of a keyboard.
- VIII. The process of loading an operating system on the computer's memory is called _____.

Q2. Write T for true and F for false in front of the following statements. (8)

- I. Title Bar shows zoom control of a program at the bottom of the window. _____
- II. System tray is on the right-hand side of the windows Taskbar. _____
- III. The background picture of a desktop is called desktop background. _____
- IV. The process of restarting a computer that is already on is called Warm booting. _____
- V. When you give input to a computer, CPU understands and process it. _____
- VI. WordPad software controls and manage the activities of a computer a computer system. _____
- VII. ALU controls different parts of computer and checks the operations of computer. _____

VIII. We perform functions on computer with the help hardware and software.

Q3. Find the odd one out and write in the space provided. (4)

i. IPO, ALU, Control Unit, Memory Unit

ii. Mouse, Scanner, Monitor, Keyboard

_____ iii. Printer,

Keyboard, MS Paint, Monitor

_____ iv. MS Paint,

Notepad, WordPad, Windows

Q4. Answer the following questions: (5)

- What is IPO cycle?
- List different parts of CPU.
- What is an operating system?
- List any four parts of a window.
- Define desktop and icons.

ART INTEGRATED ACTIVITY PROJECT

Complete the project according to your Roll No.

Roll No. 1-18 – Make a chart showing Input- Output & storage devices.

(Reference has been given to you)



Roll No. 19-40 – Make a poster on different operating systems. (Reference

has been given to you)

OPERATING SYSTEM

