

SANT NIRANKARI PUBLIC SCHOOL, GOVINDPURI

HOLIDAY HOMEWORK CLASS -2

MULTIDISCIPLINARY PROJECT

SESSION 2024- 25

Dear Parents,

We wish you and your child a very happy summer holidays. It's time to enjoy and create a bond with family, friends and relatives. To utilize this time in the most constructive way we have prepared Holiday Homework for the students on the principle of 'learning by doing' for their holistic development.

Some important instructions:

1. It's high time for all to be fit and active even by staying at home.
2. Daily exercise is must for all.
3. Eat healthy and avoid junk food.
4. Avoid heavy and oily food and increase intake of fresh fruits and water to keep you well hydrated and energetic.
5. Read newspaper daily to enhance your writing skills and vocabulary.
6. The holiday homework carries marks.
7. All the activities are to be done as instructed.



MULTIDISCIPLINARY PROJECT

About the project: In this multidisciplinary project, students will embark on an exciting journey to explore the surroundings and environment. Through a blend of Hindi, English, Maths, and Art, students will learn about various animals, trees, flowers, birds, water bodies etc.

TOPIC : EXPLORE THE ENVIRONMENT

PROJECT COMPONENTS:

HINDI

Trees/ Flowers name and Description :

- Students will learn and write five trees and flowers name in hindi on A4 sheet.
- They will write one sentence(description) for each tree and flower in hindi.

ENGLISH

Nature Observation Journal:

- Students will observe the surrounding daily.
- Write three lines about the day daily with the day and date.
- The students will describe the day. For example -Today is a sunny day. I saw ashoka trees and rose flowers.

MATHS

Nature walk:

- Students will go out for a nature walk.
- Will write 10 sentences.
- They will write and count the number of trees, birds, flowers, cars, street lights, swings in the park, animals, shops, benches in the park, etc.
- Students will observe these and write- I saw 10 trees, 6 flowers, 5 animals.

ART

Origami Flowers:

- Students will make 3 different origami flowers.
- They will paste it in the A4 sheet
- Will write the name also.

SANT NIRANKARI PUBLIC SCHOOL
SAMPLE PAPER (2024-2025)
ENGLISH
CLASS- II

NAME- _____

ROLL NO. _____

GENERAL INSTRUCTIONS:

- All questions are compulsory.
- Read the question paper carefully.
- Do the paper neatly.
- Avoid rubbing and overwriting.

SECTION -A (READING)

Q1. Read the given passage carefully and answer the questions.

(5 marks)

Emma has a new bicycle. It is bright pink and shiny. It was a gift from her uncle. He hid it behind a bush to surprise her. When Emma looked behind the bush and saw the bicycle. She jumped for joy. It was just what she wanted. She gave her uncle a hug. She loves her new bicycle and she loves her uncle.

a. What is the colour of bicycle?

b. Who was it a gift from?

c. Where was it hidden?

d. What did Emma do when she saw the bicycle?

e. Suggest a name for the topic.

SECTION- B (WRITING) (5 marks)

Q2. Answer one of them

Write a paragraph on 'My Mother'

Or

Fill in the blanks with help of picture.



happy reading park playing jumping pulling

- a. This is a scene of a _____.
- b. The children are _____.
- c. The girl is _____ a book.
- d. One boy is _____ happily.
- e. Another boy is _____ the cart.


SECTION - C (GRAMMAR)

Q3. Look at the picture and fill in the blanks.

(1X5=5)




M ____ N



C ____ T



B ____ Y



T R ____ I N

Q4. Rearrange the following words to form sentences.

(1x2=2)

a. star sun a is

b. Is today day a cloudy

Q5. Read the underlined words. Write C for common noun and P proper noun.

(1x=4)

- a. Will you go to Canada this year? _____
- b. A dog is man's best friend. _____
- c. Rahul works in a school. _____
- d. Reema loves to eat chocolate. _____

Q6. Rewrite the following with correct punctuation marks.

(1x3=3)

a. When did you come

b. These are my apples

c. Who is with you

SECTION- D (LITERATURE)

Q9. Tick the correct answer.

(1x5=5)

a. Mom punished Liza because
i. she was rude to her nanny.
ii. She did not like desert

b. Spotty was born
i. In the zoo
ii. In the forest

c. Spotty was caught by
i. The zoo keeper
ii. In the forest

d. The nanny was angry with Liza because she
i. threw the bread on the floor
ii. did not want to eat dinner

e. Liza left the room because
i. She was angry with her parents,
ii. she was not hungry

Q10. Fill in the blanks

(1x5=5)

- a. Liza _____ bread.
b. I will _____ the ball.
c. They buy and _____ the vegetables.
d. Spotty is _____.
e. Spotty lives in a _____.

Q11. Answer the following questions.

(1x2=6)

a. How did Spotty leave the jungle?

b. Why did mom not give bread to Liza for a week?

c. Did Liza is eating bread when mom did not give her any? How do you know?

संत निरंकारी पब्लिक विद्यालय

प्रतिदर्श प्रश्न पत्र (2024-25)

कक्षा- दूसरी

विषय - हिंदी

समय -2 घंटे

पूर्णांक - 40

सामान्य निर्देश -

1. इस प्रश्न पत्र में 2 खंड हैं - अ और ब।
2. दोनों खंडों के प्रश्नों के उत्तर देना अनिवार्य है।

नाम.....विभाग.....अनुक्रमांक -.....

खंड - अ (वस्तुनिष्ठ प्रश्न)

अपठित अंश

प्रश्न 1. निम्नलिखित गद्यांश को पढ़कर प्रश्नों के सही उत्तर पर (✓) का निशान लगाइए- (1x5=5)

एक खरगोश था। उसके तीन दोस्त थे लोमड़ी, बिल्ली और कुत्ता। एक दिन खरगोश को गाजर का हलवा बनाना था। तो उसने अपने दोस्तों से मदद करने के लिए कहा। लेकिन उन सब ने कुछ न कुछ बहाना बना दिया और उसकी मदद नहीं की। तब बेचारा खरगोश अकेले ही गाजर का हलवा बनाने लगा। हलवे की खुशबू सूंघकर लोमड़ी, बिल्ली और कुत्ता दौड़कर आए और बोले - अरे वाह! तुमने तो बहुत बढ़िया गाजर का हलवा बनाया है, चलो सब मिलकर खाते हैं। यह सुनकर खरगोश ने कहा- प्यारे दोस्तों! मुझे माफ़ करो। मैं यह गाजर का हलवा किसी को नहीं दूँगा। तुम सब आलसी हो। इसे खाने के लिए मुझे तुम्हारी मदद नहीं चाहिए।

(क) खरगोश के कितने दोस्त थे?

(i) दो ()

(ii) चार ()

(iii) तीन ()

(ख) एक दिन खरगोश क्या बनाना चाहता था?

(i) गाजर का हलवा ()

(ii) रोटी ()

(iii) दाल ()

(ग) खरगोश ने मदद के लिए किससे कहा?

(i) पड़ोसी से ()

(ii) अपने दोस्तों से ()

(iii) शेर से ()

(घ) खरगोश के दोस्त कैसे थे?

(i) आलसी ()

(ii) चतुर ()

(iii) मेहनती ()

(ङ.) क्या खरगोश ने अपने दोस्तों को हलवा दिया?

(i) हाँ ()

(ii) नहीं ()

(iii) थोड़ा सा ()

प्रश्न 2. चित्र देखकर सही शब्द के आगे (✓) का निशान लगाइए-

(1x2=2)

(क)



गुड़डा ()

पन्ना ()

(ख)



पत्ता ()

गुब्बारा ()

प्रश्न 3. किन्हीं तीन पशुओं के नाम लिखिए-

(1x3=3)

(क) _____

(ख) _____

(ग) _____

प्रश्न 4. निम्नलिखित पुल्लिंग शब्दों के स्त्रीलिंग शब्द लिखिए -

(1x3=3)

(क) शेर = _____

(ख) चूहा = _____

(ग) पिता = _____

प्रश्न 5. एक से अनेक चित्रों को मिलाइए

(1x3=3)



प्रश्न 6. निम्नलिखित वाक्यों में नाम की जगह आने वाले शब्द पर गोला लगाइए-

(1x3=3)

(क) दादाजी तुम्हें बुला रहे हैं।

(ख) मेरी पेंसिल लाल है।

(ग) उसे घर जाना है।

प्रश्न 7. वाक्य के अनुसार सही काम वाला शब्द चुनकर भरिए

(1x3=3)

(क) माधव गाना रहा है। (नाच, गा)

(ख) अमन फूल रहा है। (तोड़, चला)

(ग) माता जी खानारही हैं। (घुमा, बना)

प्रश्न 8. निम्नलिखित शब्दों के अर्थ लिखिए-

(1x3=3)

(क) मँडराना - (ख) उदास-

(ग) त्यागो -

प्रश्न 9. चित्र वर्णन-

(1x5=5)



➤ ऊपर दिए गए चित्र को देखकर वाक्य के अनुसार सही शब्द चुनकर खाली स्थान भरिए-

(नाव, बरसात, छाता, खुश, पानी)

(क) यह चित्रका है।

(ख) सड़क पर.....बह रहा है।

(ग) एक लड़की.....लेकर जा रही है।

(घ) लड़के पानी में कागज़ की.....चला रहे हैं।

(ङ.) सभी.....हैं।

खंड - ब (वर्णनात्मक प्रश्न)

प्रश्न 10. निम्नलिखित प्रश्नों के उत्तर लिखिए-

(2x5=10)

(क) तितली कहाँ थी और क्या कर रही थी?

उत्तर - _____

(ख) पशु-पक्षियों को पिंजरे में बंद क्यों नहीं करना चाहिए।

उत्तर- _____

(ग) सड़क पर जाते हुए बालिका ने क्या-क्या देखा?

उत्तर - _____

(घ) सूरज अपने साथ क्या लाया?

उत्तर - _____

ड.) सूरज हमें क्या संदेशा देता है?

उत्तर - _____

SANT NIRANKARI PUBLIC SCHOOL
H.H.W ASSIGNMENT (2024-2025)
MATHEMATICS
CLASS- II

M.M=40

NAME- _____

ROLL NO. _____

GENERAL INSTRUCTIONS:

- All questions are compulsory.
- Read the question paper carefully.
- Do the paper neatly.
- Avoid rubbing and overwriting.

SECTION-A

1. Choose the correct answer.

(1X6=6)

- a. Write the number names
525 _____ (five hundred twenty five/ five hundred forty five)
- b. Write the expanded form of 377= _____ (300+70+7/ 300+7+70)
- c. 56+3 is _____ (59/60)
- d. 10x0 is _____ (0/4)
- e. 19-0 is _____ (19/0)
- f. What comes after 70 _____ (71/72)

2. Fill in the blanks.

(1X6=6)

- a. 4+4+4+4 is _____
- b. 10 tens = _____
- c. 119 _____ 121 (between)
- d. 67-5 = _____
- e. 44 mangoes + 20 mangoes= _____ mangoes
- f. 9x7= _____

3. Match the following.

(1X6=6)

- | | |
|--------------------------|-----------------------|
| a. 6:30 | Children's Day |
| b. 4 weeks | Republic Day |
| c. Third day of the week | First day of the week |
| d. November | 28 days |
| e. January | half past 6 |
| f. Monday | Wednesday |

4. Complete the dodging tables.

(1X5=5)

- a. 4 x 8 = _____
- b. 9 x 5 = _____
- c. 7 x 10 = _____
- d. 9 x 8 = _____

e. $11 \times 8 = \underline{\hspace{2cm}}$

5. Solve

(1X3=3)

a) $\begin{array}{r} T \ O \\ 4 \ 3 \\ +5 \ 7 \\ \hline \end{array}$

b) $\begin{array}{r} T \ O \\ 9 \ 4 \\ -5 \ 6 \\ \hline \end{array}$

c) $\begin{array}{r} T \ O \\ 1 \ 4 \\ \times 2 \\ \hline \end{array}$

6. Write the number names

(1X4=4)

- a. 367 _____
- b. 710 _____
- c. 628 _____
- d. 499 _____

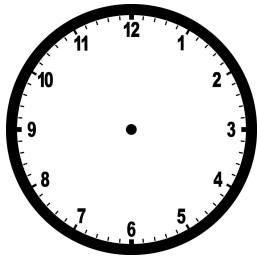
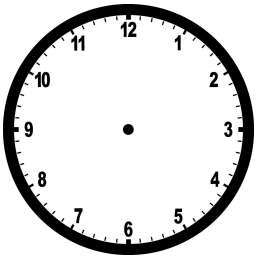
SECTION- B

7. Draw the hands.

(1X2=2)


a. 7:00

b) 3:00



8. Complete the blanks

(1X2=2)



$\underline{\hspace{1cm}} + \underline{\hspace{1cm}} + \underline{\hspace{1cm}} + \underline{\hspace{1cm}} + \underline{\hspace{1cm}} + \underline{\hspace{1cm}} = \underline{\hspace{1cm}} \quad (\underline{\hspace{1cm}} \times \underline{\hspace{1cm}})$

SECTION- C

(3X2=6)

9. In a shop, there are 65 red kites, 230 green kites and 145 yellow kites. How many kites are there in all?

10. The sum of two numbers is 85. One of them is 30. Find the other.

SANT NIRANKARI PUBLIC SCHOOL
SAMPLE PAPER (2024-2025)
COMPUTER
CLASS- II

NAME- _____

ROLL NO. _____

Q1. Choose the correct answer. (1x4=4)

- a. We use computers for _____ in schools.
 - i. Teaching
 - ii. Dignosis
- b. _____ uses computers to catch criminals.
 - i. Police
 - ii. Doctors
- c. When we see our work on the paper, it is known as _____.
 - i. soft copy
 - ii. processing
- d. Which of the following give us output from the computer?
 - i. scanner
 - ii. printer

Q2. Fill in the blanks with the help of the box. (1x4=4)





Input banks optical disks book and cancel

- a. _____ are circular shaped disks that store data.
- b. Microphone and joystick are the examples of _____ device.
- c. Computers in _____ are used to keep records of customer's accounts.
- d. With the help of computers you can easily _____ hotel rooms,

Q3. Write true or false. (1x4=4)

- a. Computers are used only in schools and offices. _____
- b. We use output devices to store data and information. _____
- c. Computers are used in supermarkets to keep records of passengers and guest details. _____
- d. A printer prints images and documents in black only. _____

Q4. Match the following. (1x4=4)

- a.  Input data and instructions
- b.  Displays results and work done
- c.  Text and video chats
- d.  Keep details of account holder

Q5. Answer the following questions. (2x2=4)

- a. Write down 2 uses of computers.

- b. What is a device? Give examples.
