

SANT NIRANKARI PUBLIC SCHOOL, GOVINDPURI

SUMMER VACATION HOMEWORK



It's Activity Time... let's go!

Dear Parents,

The time has come when you and your child can spend all the time together. That is right, it's the holiday season! Have lively discussions with your child, explore new ideas together, help them communicate and articulate their ideas.

Help them be as creative as they can.

Your child will need your support and encouragement to do the given tasks.

CLASS-2
SUBJECT-ENGLISH

Fill in the blanks:-

1. My name is _____.



2. _____ elephant. (Fill the correct article – an, an, the)



3. What is the plural of kite? _____



4. We _____ going to the park. (Fill are or is)



5. Underline the naming words in the following sentences:

(i) Riya has a beautiful pink dress.

(ii) A basket is full of grapes, bananas and apples.

(iii) Raman is playing badminton with Ritu.

6. Identify the cartoon character.



7. Read about Tommy and answer the questions that follow:



This is my little Tuffy.

How soft and brown its fur is! Isn't it pretty?

Tuffy is in the park.

He saw a big ball and ran to catch it.

Tuffy was so happy to find the ball.

a. What colour is Tuffy's fur?

Ans. _____

b. What did he find in the park?

Ans. _____

c. What is the opposite of happy?

Ans. _____

8. Write the given words in the correct alphabetical order:

cap, doll, bell, egg, aid

Ans. _____

9. Join the words to make the ing words:-

a. Hop + ing = _____

b. Knit + ing = _____

c. Run + ing = _____

d. Clap + ing = _____

10. In the given word, fill in the blanks with correct vowels:

a. D r _____ g _____ n

b. B l _____ _____ m

11. Write the given group of words in correct order to make a sentence:

stars in sky the shining are the




12. Do one page of handwriting daily in a notebook. Decorate the notebook beautifully with your own imagination and read one page/ small story every day from your English course book.

Make any one project of your choice from the two projects given below:


PROJECT 1

Draw any shape of your choice on a coloured sheet of paper. With the help of a vowel of your choice (a,e,i,o,u), write words which consist of that particular vowel. Refer to the picture given below as a sample.



PROJECT 2

On a coloured sheet of paper, draw any one box (names/ places/ animals/ things) to show nouns. Paste relevant pictures and make it colourful. Refer to the given sample for your reference. Also play the game of nouns (name, place, animal, thing) with your friends and family.



Prepare yourself for periodic test-1 to be held in the month of July.

विषय - हिंदी कक्षा- दूसरी

निर्देश:

- * गृह कार्य हेतु आप अलग कॉपी या फोल्डर बना सकते हैं ।
- * कॉपी के बाहर आप नाम, कक्षा सेक्शन अवश्य लिखिए ।
- * कार्य स्पष्ट एवं सुंदर करें ।

सही उत्तर पर (✓) का चिन्ह लगाइए :

1. "कबूतर" शब्द में कौन सी मात्रा है?

- आ की मात्रा
- इ की मात्रा
- ऊ की मात्रा



2. "ए" की मात्रा वाला शब्द चुनो ।

- शेर
- मैदा
- किला

3. शब्दों के सही मेल से _____ बनते हैं ।

- शब्द
- वाक्य
- व्यंजन

4. सही वाक्य चुनो ।

- हो रही है वर्षा ।
- वर्षा हो रही है ।
- हो वर्षा रही है ।



5. नाम वाला शब्द चुनो ।

- आरव
- खेलना
- मैं

6. "राजा" का लिंग बदलो ।



- o रानी
- o राजा
- o राज्य

7. "पंखा" शब्द का वचन बदलो ।

- o पंखे
- o पंखुड़ी
- o पंख

8. " रोहन ने पीली कमीज पहनी है।" इस वाक्य में संज्ञा शब्द कौन सा है?

- o पीली
- o कमीज
- o रोहन



9. दिनों के नाम के फ्लैश कार्ड बनाइए ।

10. महीनों के नाम के फ्लैश कार्ड बनाइए ।

11. एक से बीस तक हिंदी में गिनती को रंगीन कागज से कोई भी डिजाइन काटकर A4 शीट पर दर्शाए ।

12. वर्ण के कितने भेद होते हैं ? उनके नाम लिखिए ।

13. संयुक्त व्यंजन कितने होते हैं ? उनके नाम लिखिए ।

14. निम्नलिखित गद्यांश को पढ़कर प्रश्नों के उत्तर दीजिए -

राम और श्याम एक दिन जंगल में गए । जंगल बहुत बड़ा था । वह चलते-चलते थक गए थे । इसलिए पीपल के पेड़ के नीचे बैठकर सुस्ताने लगे। थोड़ी देर में राम को प्यास लगी तो श्याम पास के तालाब से पानी लाया और राम को दिया। कुछ देर बाद दोनों को भूख लगी तो खाने की तलाश करने लगे। कुछ दूरी पर उन्हें आम का पेड़ मिला, फिर उन्होंने आम खा कर अपनी भूख मिटाई। शाम को दोनों घर की ओर निकल पड़े । जाते-जाते उन्होंने जलाने के लिए कुछ सुखी लकड़ियाँ ले ली थी।

i. राम और श्याम कहाँ गए थे?

ii. श्याम कहाँ से पानी लेकर आया था?

iii. राम और श्याम ने जंगल में क्या खाया था?

iv. दोनों किस पेड़ के नीचे बैठे थे?

v. राम और श्याम घर पर क्या लेकर गए थे?

15. इस चित्र को देखकर 5 वाक्य लिखिए।



16. कोई भी अपनी मनपसंद कहानी पढ़िए और हाव-भाव के साथ कंठस्थ कीजिए ।

17. रोजाना एक पेज सुलेख लिखें ।

18. कोई भी एक गतिविधि करिए ।

* हिंदी व्याकरण से संबंधित किसी भी एक विषय पर चार्ट बनाइए ।

* घर पर उपलब्ध वेस्ट मटेरियल (बेकार सामग्री) से एक गुड़िया या कोई भी खिलौना बनाइए ।

MATHEMATICS
CLASS II


























PROJECT: Do any two projects-

1. Prepare a 3D poster on 'Ascending and Descending order'.
2. Prepare a 3D robot using geometric shapes such as a square, triangle, circle, etc.
3. Prepare a model of a clock.

WORKSHEET

READ THE FOLLOWING QUESTIONS AND ANSWER THEM:-

1. Complete the following skip counting.

 2	 ○	 ○	 8	 ○
 ○	 ○	 16	 ○	 ○
 22	 ○	 ○	 ○	 ○
 ○	 34	 ○	 ○	 ○
 ○	 ○	 46	 ○	 ○

2. Count the number of letters in the given word and write them.

OCTOPUS



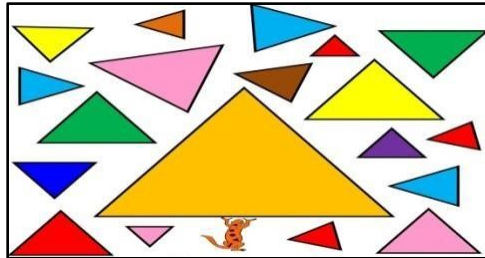
3. Write the name of the shape given below.



4. Alex has 10 cherries. Then his mother gave him 7 more. How many are there in total?




5. Count the number of TRIANGLES in the given picture and write them.



6. Write the number as shown in the abacus.



7. Write the correct number name of the following number:



8. The following number even or odd?



35

9. In a kitchen, there are 90 spoons, 405 glasses and 120 plates. How many utensils are there in the



kitchen?



10. Learn and write tables from 2 to 15.

Class-II

GK

Q1. Make a logo of G20 Summit on A-4 size sheet and colour it.

Q2. Do pages 5,7,9,11,12,13,14,15,17,19 in GK book.

Q3. Solve this worksheet-

Countries and Nationalities

COUNTRIES

BRAZIL SWEDEN JAPAN CHINA FRANCE SPAIN

NATIONALITIES

BRAZILIAN SWEDISH JAPANESE CHINESE FRENCH SPANISH

 COUNTRY <input type="text"/> She's from <input type="text"/>	 NATIONALITY <input type="text"/> She's <input type="text"/>	 COUNTRY <input type="text"/> He's from <input type="text"/>	 NATIONALITY <input type="text"/> He's <input type="text"/>
 COUNTRY <input type="text"/> He's from <input type="text"/>	 NATIONALITY <input type="text"/> He's <input type="text"/>	 COUNTRY <input type="text"/> She's from <input type="text"/>	 NATIONALITY <input type="text"/> She's <input type="text"/>
 COUNTRY <input type="text"/> She's from <input type="text"/>	 NATIONALITY <input type="text"/> She's <input type="text"/>	 COUNTRY <input type="text"/> He's from <input type="text"/>	 NATIONALITY <input type="text"/> He's <input type="text"/>

SUBJECT-ART

Do pages 5,6,7,10,11,13,14 in your art file.

SUBJECT- COMPUTER

Q1 Revise and learn Chapter-1 and 2.

Q2 Solve the Riddles.







Q3 Rewrite the jumble words -

1 OMEUS

2 TONIROM

3 ERPTRIN

4 SKEPAERS

5 BMWEAC

Q4 MATCH :

1 PRINTER



2 HEADPHONE



3 MEDICAL REPORT



4 ITEM BILLS



Q5 Fill in the blanks-

Diseases	offices	criminals	monitor	web camera
----------	---------	-----------	---------	------------

- 1 The work done on computer is shown on _____
- 2 Police track _____ with the help of computers.
- 3 _____ are diagnosed by the help of computer.
- 4 _____ use computer to prepare reports.
- 5 Photos and videos are captured in _____.

***Kindly go through the given link for preparation of forthcoming cybolympaid .

<https://playground.edusoft.co.in/courses/cybolympiad-preparation/>

PROJECT

NOTE: Make any one

- 1 Make a drawing on "Uses of computer" on A3 size sheet.
- 2 Make a drawing of "Computer devices" on A3 size sheet.