

# WINTER HOLIDAY HOMEWORK (2020-21)

SANT NIRANKARI PUBLIC SCHOOL, GOVINDPURI

CLASS – II

SUBJECT- ENGLISH

ASSIGNMENT – I

**Q1. Read the passage given below and the answer the questions:**

## Baby Chickens

A mother chicken sat on her nest. She was a big chicken with yellow feathers. She was sitting on ten eggs. One day, the eggs cracked open. Then some little chicks popped out of the eggs. Now the chicken had six chicks.

**A. Fill in the blanks with the correct answer:**

- i) Mother chicken was sitting on \_\_\_\_\_ eggs.
- ii) The title of the passage is \_\_\_\_\_.
- iii) The mother chicken was sitting on her \_\_\_\_\_.

**B. Choose the correct answer:**

- i) Mother hen had \_\_\_\_\_ chicks.
  - a) four
  - b) five
  - c) six
  
- ii) What is the colour of the feathers of mother chicken?
  - a) Red
  - b) Brown
  - c) Yellow
  
- iii) The baby chicks that popped out of the eggs were:
  - a) little
  - b) big
  - c) fat

**Q2. Choose the correct answer:**



- i)
  - a) The cat is under the plant.
  - b) The cat is behind the plant.
  - c) The cat is on the plant.

ii) We \_\_\_\_\_ eating our breakfast.

- a) were
- b) have
- c) has

iii) There \_\_\_\_\_ an elephant in the zoo.

- a) are
- b) is
- c) were



iv)

- a) The monkey is sitting on the box.
- b) The monkey is sitting under the box.
- c) The monkey is sitting in the box.

v) I \_\_\_\_\_ dancing with my sister.

- a) are
- b) were
- c) am

vi) She \_\_\_\_\_ watched the film with her parents.

- a) had
- b) is
- c) was

**Q3. Rewrite the following sentences using the correct punctuation:**

- i) i am playing with my mother and father
- ii) how many apples are you eating
- iii) they are going to the park
- iv) where do you live

**Q4. One and many:**

- i) Dog - \_\_\_\_\_
- ii) Brushes - \_\_\_\_\_
- iii) Baby - \_\_\_\_\_
- iv) Buses - \_\_\_\_\_
- v) Puppies - \_\_\_\_\_

**Q5. Write 8-10 lines on my favourite festival.**

## ASSIGNMENT – II

### Q1. Read the clues and complete the given words:

1. It is the opposite of front. Ba \_ \_
2. It happens when it is hot. \_ \_ eat
3. You use a broom for this. \_ \_ eep
4. It is a bird. \_ \_ allow

### Q2. Write a word with the last letter of the word before it:

Example: rain → nest → tree → egg → girl → lion

1. Fire → \_\_\_\_\_
2. Bird → \_\_\_\_\_
3. King → \_\_\_\_\_
4. Cold → \_\_\_\_\_
5. Good → \_\_\_\_\_

### Q3. Make new sentences by using words from the box in place of the words in red:

Flowers	Sister	Cat	Pencils	Tiger
---------	--------	-----	---------	-------

1. Rohan has a pet **dog**.
2. There are colourful **butterflies** in the garden.
3. Ali has two **pens**.
4. My **brother** is playing with the yellow balloon.
5. The **lion** is sleeping in his cave.

### Q4. Fill in the blanks with the correct answer:

1. He \_\_\_\_\_ (go/ goes) to the temple every day.
2. My mother and I \_\_\_\_\_ (do/ does) our exercise daily.
3. Riya \_\_\_\_\_ (goes/ go) to school on time.
4. John \_\_\_\_\_ (does/ do) not like snakes.
5. \_\_\_\_\_ (Do/ Does) your homework.

### Q5. Write 8-10 sentences describing your favourite hobby.

### Q6. Learn any one poem from the following:

- a) The Rainbow Fairies
- b) With a friend
- c) Who has seen the wind

## ENGLISH ACTIVITY


### LET'S WORK OUR HANDS IN THE KITCHEN!



Try to make a veg sandwich/ aloo tikki sandwich/ fruit salad in the presence of your parents. Use colourful vegetables such as cucumber, capsicum, tomato /fruits such as papaya, apple, orange to do the same.

Observe the procedure of making this delicious food. Click beautiful pictures of the same and paste them in a scrapbook.

Describe how your dish tasted and how it impressed your family members!



**SUBJECT: MATHEMATICS**  
**ASSIGNMENT - I**



**Q1. Choose the correct answer:**

i) One half = \_\_\_\_\_

a)  $\frac{1}{3}$

b)  $\frac{1}{2}$

c)  $\frac{1}{4}$

ii) How many one-fourths make a whole?

a) 1

b) 4

c) 2

iii) 5, 8, 11, 14, \_\_\_\_\_

a) 18

b) 17

c) 16

iv) 101, 202, 303, \_\_\_\_\_

a) 404

b) 505

c) 606

v) How many 2's are there in 14?

a) 14

b) 7

c) 2

vi)  $339 \div 1 =$  \_\_\_\_\_

a) 0

b) 1

c) 339

vii)  $0 \div 26 =$  \_\_\_\_\_

a) 26

b) 0

c) 1

viii)  $63 \div 7 =$  \_\_\_\_\_

- a) 63
- b) 7
- c) 9



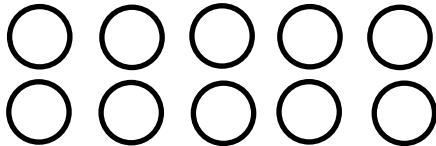
**Q2. Use multiplication and division facts to complete the following:**

i)  $4 \times 8 = 32$                       then                       $32 \div 4 =$  \_\_\_\_\_  
ii)  $54 \div 6 = 9$                       as                       $6 \times 9 =$  \_\_\_\_\_


Q3. John counted 36 wheels in his toy basket. Each car has 4 wheels. How many toy cars does he have?

**Q4. Shade the given collection to show the given fraction:**

a)  $7/10$



b)  $5/12$



**Q5. Divide 72 by 8 using long division.**

**Q6. Tick the correct answer:**

a) One out of two equal parts of a whole is \_\_\_\_\_.

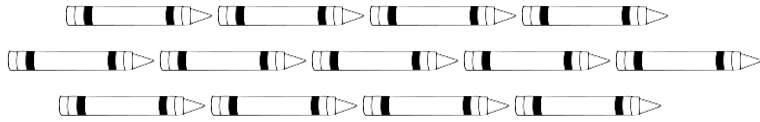
- i)  $1/2$
- b)  $1/3$
- c)  $1/4$

b) The fraction for the shaded part is \_\_\_\_\_.

- a)  $1/2$
- b)  $1/3$
- c)  $1/4$


**Q7. Divide 63 by 9 using long division method.**

**Q8. Manu has some crayons. He wants to give half them to his maid's son. Colour the crayons he wants to give. Do you think sharing the crayons will Manu happy? (Value based)**



## ASSIGNMENT - II

**Q1. Choose the correct answer:**



- a) circle
- b) cube
- c) square



- ii)
- a) cylinder
  - b) cone
  - c) sphere

iii)  $519 \div 519 = \underline{\hspace{2cm}}$

- a) 0
- b) 519
- c) 1

iv) Division by zero is not possible.

- a) True
- b) False

v)  $1/3 + 1/3 + 1/3 = \underline{\hspace{2cm}}$

- a) 1
- b) 0
- c) 3

vi) AZA, BYB, CXC,                     

- a) EYE
- b) DYD
- c) FYF



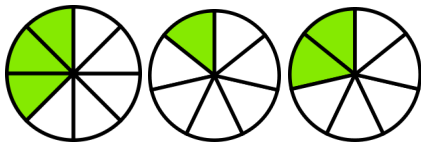
vii) 14, 26, 38, \_\_\_\_\_

- a) 54
- b) 52
- c) 50

viii)  $31 + 32 + 33 + 34 + 35 + 36 + 37 + 38 + 39 + 40 =$  \_\_\_\_\_

- a) 355
- b) 250
- c) 315

**Q2. Which of the following represents  $\frac{2}{7}$  ?**



**Q3. In a collection of 12 balls, 3 balls are red coloured, 4 balls are blue coloured and remaining balls are yellow coloured. Write the fraction for the yellow coloured balls.**

**Q4. Circle the correct shape of the following objects:**



- i)
- a) cylinder
- b) sphere
- c) cube



- ii)
- a) cube
- b) cylinder
- c) cone



- iii)
- a) cube
- b) sphere
- c) cone





iv)

- a) cuboid
- b) cone
- c) cube



v)

- a) cylinder
- b) sphere
- c) cone



vi)

- a) cone
- b) cuboid
- c) sphere

**Q5. Circle the odd one out:**

i) 3, 5, 7, 8, 11, 13

ii)

**Q6. Ankur has 42 bananas. He distributes those equally among his 7 friends. How many bananas will each friend get? Do you also share things with your friends? (Value based)**

**Q7. Mohan spent ₹ 50 to buy some chocolates. If he bought 5 chocolates in total, what is the cost of one chocolate?**

**ACTIVITY:**

**TO MAKE YOUR OWN BEAM BALANCE**



**OBSERVATION SHEET**

**Name of the activity:** \_\_\_\_\_

**Student's Name:** \_\_\_\_\_

**Material Required:**

**Steps taken:**

**What did you learn from the activity?**



## SUBJECT: COMPUTER

### ASSIGNMENT



#### 1. Fill in the blanks-

- We can \_\_\_\_\_ games on computer.
- Releasing the left button after dragging is called \_\_\_\_\_.
- Computer works very \_\_\_\_\_.
- Paint button in Windows 7 is replaced in Windows 10 by \_\_\_\_\_ menu.
- A mouse has a \_\_\_\_\_ wheel.

#### 2. Write True or False-

- The commands like open ,print, save etc are provided by the file menu.
- We can choose different colours from the colours palette.
- Scroll means moving up, down or sideways in a window.
- We can choose different colours from the colours palette.
- Flipping Mouse buttons means interchanging their functions.




#### 3. Answer the following questions.

- Name parts of a computer mouse.
- Which toolbar contains common commands to access without clicking on any tab?
- Which tool is used to provide a set of shapes to draw?
- In which area you can draw in MS Paint?

#### 4. Solve this word search.


## Computer Word Search

**LOG ON FOR FUN!**  
Find and circle all of the words in the list below.



G	W	E	B	S	I	T	E	L	K
S	C	R	E	E	N	Y	B	P	E
F	M	A	L	A	T	S	G	R	Y
Q	O	G	A	M	E	S	K	I	B
D	U	T	P	C	R	F	L	N	O
I	S	A	T	M	N	R	H	T	A
S	E	Z	O	D	E	X	A	E	R
C	O	M	P	U	T	E	R	R	D

**COMPUTER**  
SCREEN  
KEYBOARD  
MOUSE  
WEBSITE



**PRINTER**  
DISC  
INTERNET  
GAMES  
LAPTOP

Copyright 2011-2012 Education.com  
Created by: [www.education.com](http://www.education.com)

5. Draw a keyboard.



### ACTIVITY

Draw and colour any one drawing using your imagination in MS Paint.

## विषय-हिंदी

### कार्यपत्रक-1

प्रश्न 1 "ऑनलाइन क्लास" पर पांच वाक्य लिखो ।

प्रश्न 2 दिनों और महीनों के नाम लिखो ।

प्रश्न 3 एक से पचास तक हिंदी में गिनती लिखो ।

प्रश्न 4 हिंदी पुस्तिका में से रोज एक पेज पढ़ो ।

प्रश्न 5 दो- दो नाम लिखो।

पक्षियों के \_\_\_\_\_

पालतू पशुओं के \_\_\_\_\_

जंगली जीवों की \_\_\_\_\_

पानी में रहने वाले जीवों के \_\_\_\_\_

मांस खाने वाले जीवों के \_\_\_\_\_

प्रश्न 6 जानवरों को उनकी बोली से मिलाओ ।

गुन गुन

बकरी

ची ची

बिल्ली

म्याऊं म्याऊं

भंवरा

में में

चिड़िया

### कार्यपत्रक-2

प्रश्न 1 निम्नलिखित प्रश्न के उत्तर लिखो ।

क. पौधों को क्या देते रहना चाहिए ?

उत्तर \_\_\_\_\_

ख. बुलबुल अपना घर घास और जड़ों से बनाती है, आपका घर किन चीजों से बना है?

उत्तर \_\_\_\_\_

ग. बस के भीतर आगे की तरफ से कैसी आवाज आ रही थी ?

उत्तर \_\_\_\_\_

घ. सारंगी कौन चुपके से उठा कर ले गया था? ?

उत्तर \_\_\_\_\_

ङ. अगर आपके दोस्त की पेंसिल खो गई है, तो आप उसकी मदद कैसे करेंगे ?

उत्तर \_\_\_\_\_

प्रश्न 2 समझो और लिखो ।

उदाहरण :- मेला-मेले

केला \_\_\_\_\_

कौवा \_\_\_\_\_

संतरा \_\_\_\_\_

लड़का \_\_\_\_\_

प्रश्न 3. रोजाना 1 पेज सुलेख करो ।

**प्रश्न 4 खाली स्थान भरो ।**

क) सप्ताह का पहला दिन \_\_\_\_\_ है ।

ख) साल का चौथा महीना \_\_\_\_\_ है ।

ग) गुरुवार को \_\_\_\_\_ भी कहते हैं।

घ) सभी बच्चे फुलवारी की \_\_\_\_\_ करते हैं ।

ङ) साल का आखरी महीना \_\_\_\_\_ है ।

**प्रश्न 5 इन्हें क्या कहते हैं-**

क) जो जूते सही करता है।

ख) जो आप का इलाज करता है ।

ग) जो लकड़ी का सामान बनाता है ।

घ) जो खेती करता है ।

ङ) जो बंदर का नाच दिखाता है ।

**\*आपकी हिंदी पुस्तक रिमझिम की कविता "सूरज जल्दी आना जी" या "तितली और कली" याद करो और वीडियो बनाकर भेजो।**

**स्वयं मूल्यांकन दिसंबर रचनात्मक गतिविधि**

विद्यार्थी का नाम \_\_\_\_\_

सेक्शन \_\_\_\_\_

विषय \_\_\_\_\_

दिनांक \_\_\_\_\_

गतिविधि का नाम \_\_\_\_\_

विभिन्न प्रकार की सब्जियों का प्रयोग करके एक स्वादिष्ट सैंडविच तैयार करो ।

रचनात्मक कार्य हेतु सहायक सामग्री लिखिए -

बनाने की विधि-

गतिविधि कार्य करते समय आप अपनी फोटो कार्य करने से लेकर पूरा होने तक खींचकर उसके प्रिंट आउट निकाल कर यहां चिपकाए !

मूल्यांकन आपने इस गतिविधि से क्या सीखा ?

### **SUBJECT-DRAWING**

**\*Do pages 27, 32, 33, 36 and 38 in your art book.**

**\*Draw a clock and a rainbow in your drawing file.**

