

**SANT NIRANKARI PUBLIC SCHOOL, GOVINDPURI**

**CLASS- VII**

**SESSION (2020-21)**

**Date: 03.04.2020 – 08.04.2020**

**GENERAL INSTRUCTIONS**

- 1) Don't go outside to take the printout. Just copy the assignment from your android phone.**
- 2) Do the assignment from your stationery available at home.**
- 3) It is mandatory to do the assignment as the same will be marked for your Internal Assessment.**
- 4) Don't panic. Eat healthy food, be safe and happy.**

**ENGLISH ASSIGNMENT 1**

**Q1. Read the following poem and answer the given questions:**

A bird came down the walk:  
He did not know I saw.  
He bit an angleworm in  
halves and ate the fellow,  
raw.

And then he drank a  
dew from a  
convenient grass,  
And then hopped sidewise to  
the wall to let a beetle pass.

He glanced with rapid  
eyes That hurried all  
abroad, --  
They looked like frightened beads,

I thought; He stirred his velvet  
head Like one in danger.  
cautious, I offered him a  
crumb, and he unrolled  
his feathers and rowed  
him softer home

Then oars divide the ocean,

Too silver for a seam,  
Or butterflies, off banks of noon,  
Leap, splash less, as they swim.

- i. What is this poem about?
- ii. Find a pair of rhyming words from the given poem.
- iii. Write a synonym of the word, 'scared' from the given poem.
- iv. Give an appropriate title to this poem.
- v. Make meaningful sentences using the following words:
  - a) Convenient
  - b) Rapid
  - c) Fellow

**Q2. Fill in the blanks with suitable Prepositions:**

- i. He walked \_\_\_\_\_ the edge of the desert.
- ii. Sit \_\_\_\_\_ the tree.
- iii. I don't know how she manages to support such a large family. She has nothing \_\_\_\_\_ her pension.
- iv. Granny is arriving \_\_\_\_\_ the 3.30 train.
- v. His house is \_\_\_\_\_ Mumbai and Thane.
- vi. Raja's birthday was \_\_\_\_\_ 28<sup>th</sup> February.

**Q3. Write an interesting story based on the given hints in about 150 words. Also, give a title to your story:**

A tiger gets caught in a cage----a kind traveler releases it-----Tiger pounces on the man----the man pleads for mercy---Tiger allows him three chances to seek help the man pleads with a tree-the tree says men are selfish. The man seeks the pathway's help - it declines to help, calls people ungrateful. -----A jackal comes by, the man calls for help---- the jackal asks the tiger how he had got caught the tiger enters the cage to show just that and the jackal latches the cage.

## MATHEMATICS ASSIGNMENT – 1

Q1. Do as directed :

- i. Find the product of  $(-3) \times (0)$
- ii. Solve  $x - 3 = 7$
- iii. 7Rupees 7Paise = Rupees \_\_\_\_\_
- iv.  $132 + (-78) =$  \_\_\_\_\_
- v. First four multiples of 12.
- vi. Write smallest prime number.
- vii. First No x Second No = \_\_\_\_\_ x LCM
- viii. Write the Roman Numeral of 1045
- ix. Write Successor of 3,67,898.
- x. Simplest form of  $500 : 40$
- xi. Find complement of  $79^\circ$ .
- xii. If One  $\theta = 6$  laptops then  $\theta\theta\theta\theta$  equals to \_\_\_\_\_.
- xiii. What is the sum of two supplementary angles?
- xiv. Multiply :  $13.2 \times 8$
- xv. Draw Intersecting Lines.

Q2. Simplify :-  $105 - 520 + 650 + (-210)$

Q3. Find the Sum of  $135 + 11.3 + 17.83$

Q4. Solve:  $\frac{5}{7} + \frac{2}{3}$

Q5. Write the decimal numbers in descending order.

31.579, 8.579, 13.612, 13.643, 5.789, 8.678.

Q6. What is the difference between the face value and place value of 9 in 39,86,324?

Q7. Using the divisibility test, find 212348 is divisible by 2 or not. (give reason)

Q8. Draw factor tree of 54.

Q9. Draw an angle of  $145^\circ$  with the help of Protractor.

Q10. Define polygon. Draw a polygon with nine sides and name them.

Q11. Find the HCF of 32, 216 and 144.

Q12. The following are the number of fans purchased by a hotel in first six months of a year:

MONTHS	JAN	FEB	MARCH	APRIL	MAY
FANS	20	35	45	70	65

Draw a pictograph for the above data.

Q13. Solve:

- i.  $22 \times 104$  (using Distributive Property)
- ii.  $57 \div [ \{ (10 + 5) - 3 \times 2 \} + 10 ]$

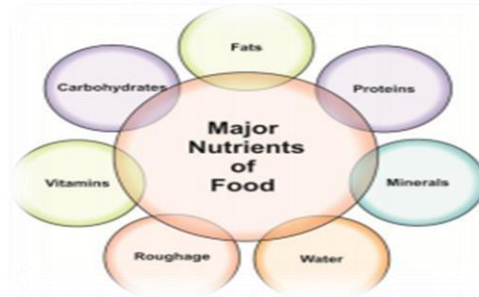
Q14. The Sum of two integers is -73. If one of them is -48, Find the other.

Q15. Divide 1250 marbles between Amit, Anuj and Sonu in the ratio of 2: 1 : 2.

## SCIENCE ASSIGNMENT-1

**Q1. Categorize the major nutrients of food into the following groups as per the function they perform:**

- a) Body building foods
- b) Energy giving foods
- c) Protective foods



**Q2. Match the events related to motion in column I with the types of motion given in column II.**

COLUMN I	COLUMN II
(a) A moving wheel of a sewing machine	(i) Circular motion
(b) Movement of tip of the minute hand of a clock in one hour	(ii) Rotational motion
(c) A moving swing	(iii) Periodic motion

**Q3. Write the food components which are related with the following deficiency diseases:**

- i) Marasmus \_\_\_\_\_
- ii) Night blindness \_\_\_\_\_
- iii) Osteoporosis \_\_\_\_\_
- iv) Beri - Beri \_\_\_\_\_
- v) Pellagra \_\_\_\_\_
- vi) Haemorrhage \_\_\_\_\_

**Q4. Arrange the following lengths in their increasing magnitude:**

1 centimetre, 1 metre, 1 millimetre, 1 kilometre.

\_\_\_\_\_

**Q5. Tick the correct answer:**

- i) The mirror used by dentists is:
  - a) plane mirror
  - b) concave mirror
  - c) convex mirror
  - d) all of these

ii) One decagram is equal to:

- a) 10 g    b) 100g    c) 10 kg    d) 100 kg

iii) The needle in a magnetic compass is

- a) non-metal    b) magnet    c) plastic    d) fibre

iv) The gas responsible for global warming is:

- a) oxygen    b) nitrogen    c) carbon dioxide    d) hydrogen

v) Which of the following is a herbivore?

- a) man    b) cow    c) crow    d) tiger

**Q6. Fill in the blanks:**

i) \_\_\_\_\_ are broad, sharp edged front teeth.

ii) The process by which butter is made by stirring vigorously the fresh cream is called \_\_\_\_\_.

iii) The stem and flower of \_\_\_\_\_ plant is cooked and eaten in various parts of India.

iv) An object is said to be in \_\_\_\_\_ if its position with respect to another object changes with time.

vi) The blades of a rotating fan shows \_\_\_\_\_ motion.

**Q7. Give one word answers:**

i) The indigestible material in the food. \_\_\_\_\_

ii) Example of scavenger. \_\_\_\_\_

iii) Organisms which make their own food. \_\_\_\_\_

iv) Part of the flower that turns into a fruit. \_\_\_\_\_

v) Smallest structural unit in living things. \_\_\_\_\_

**Q8. Give reasons for the following:**

i) Why is glucose given to sportsmen?

ii) A child has a pot belly, thin legs and scaly skin. What is the name of the disease? What could be the reason for this condition?

iii) Why are cooking utensils not made from plastic?

iv) Why do mountaineers carry oxygen cylinders with them?

**Q9. Draw a neat and well labelled diagram of structure of a flower and explain its parts.**

## **SOCIAL STUDIES ASSIGNMENT-1**

### **Q1. Give one-word answer for the following:**

- i The first state to implement Mid Meal scheme was \_\_\_\_\_.
- ii Universal Adult Franchise means \_\_\_\_\_.
- iii India is the largest \_\_\_\_\_ in the world.
- iv The various ways through which we communicate in society is known as \_\_\_\_\_.
- v The largest continent of the world is \_\_\_\_\_.
- vi. \_\_\_\_\_ is the Chief Minister of Delhi.
- vii An American- African woman who became instrumental in starting an agitation against the discriminatory practice of the whites \_\_\_\_\_.
- viii An Independent candidate means \_\_\_\_\_.
- ix \_\_\_\_\_ is known as the 'Green planet' of our Solar System.
- x The President of India is \_\_\_\_\_.

### **Q2. Give reasons for the following statements:**

- i Most television channels and T.V. are part of big business houses because \_\_\_\_\_.
- ii. The Right to Information Act 2005 came into force because \_\_\_\_\_.
- iii. Buying and selling can take place without going to marketplaces by \_\_\_\_\_.
- iv. Some advertisements are shown repeated by during the same programme because \_\_\_\_\_.
- v. The Earth has a tilted axis because \_\_\_\_\_.
- vi The discovery of fire was significant for the Early Man because \_\_\_\_\_.

### **Q3. Who built what:**

- i. Qutab Minar-
- ii Jama Masjid-
- iii Red Fort-
- iv Taj Mahal-

**Q4. Define the following terms briefly:**

i Political Party

ii Revolution

iii Edicts

iv Inscriptions

v Female Foeticide

**Q5. Match the following:**

- |                    |                                 |
|--------------------|---------------------------------|
| a) Wholesaler      | i) Chain stores                 |
| b) Informal Sector | ii) Bulk commodities            |
| c) KFC             | iii) Nurturers                  |
| d) Women           | iv) Social evil                 |
| e) Dowry death     | v) Agriculture, mining, weaving |

**Q6. State True or False for the following statements:**

- i. The Right to Information Act increases transparency in governance.
- ii Andhra Pradesh is the fifth largest state in the country.
- iii Days are longer than nights in winter.
- iv Soil is affected by climatic factors.
- v Mesolithic Age means the Middle Age in ancient times.

## SANSKRIT ASSIGNMENT-1

3-4-2020 8-4-20

संत निरंकारी पब्लिक विद्यालय  
कक्षा - सप्तम  
विषय - संस्कृत  
कार्यपत्र

प्र०-1 राहुलः जंतुशालाम् गच्छति । सः जनकेन सह गच्छति ।  
तत्र सः एकः सिंहः पश्याति । सिंहः उच्चैः गर्जति ।  
ततः सः मयूरं पश्याति । मयूरः उपवने शोभनं नृत्यति ।  
सः पृक्षी वानरं दृष्ट्वा भयभीतः अस्ति । वानरः रुदती  
फलं खादति । एकः अन्यः वानरः अपि तत्र कूर्दति ।  
जंतुशालायाम् अनेके मृगाः सन्ति । राहुलः सर्वान् मृगान्  
पश्याति प्रसन्नः च भवति । ततः सः गृहम् आगच्छति ।

- (i) राहुलः कुत्र गच्छति ?  
(ii) सः केन सह गच्छति ?  
(iii) कः उच्चैः गर्जति ?  
(iv) वानरः किम् खादति ?

प्र०-2 मिलान करे ।

आता है	खादति
कूर्ता है	गच्छति
जाता है	पश्याति
खाता है	आगच्छति
देखता है	कूर्दति

प्र०-3 अर्प वताओ ।

1. उपवनम्
2. वधुः
3. पशुः



प्र०-४ अपेक्षित गद्यांश

पितामही शयन कक्षे गच्छति । सा ईश्वरं स्मरति । तत्पश्चात् सा शयनं करोति । प्रातः सा पञ्चवादने उतिष्ठति । सा स्नानं करोति । स्नानस्य पश्चात् सा देवस्य पूजनं करोति । सा भक्ति-गानं गायति । सा सूर्यम् नमस्ते । सा वदति - सूर्याय नमः । सूर्यः संसाराय जीवनं ददाति । उक्तः सूर्यः पूज्यः अस्ति ।

- (i) पितामही कुत्र गच्छति ?
- (ii) सा कदा उतिष्ठति ?
- (iii) सा कम् नमति ?
- (iv) कः संसारस्य जीवनं ददाति ?

प्र०-५ समानार्थक पदानि

- (i) प्राप्य
- (ii) कुशलाः
- (iii) हर्षस्य
- (iv) वरुः
- (v) पैद्यम्

प्र०-६ विलीन शब्दः

- (i) अधः नीचं
- (ii) अन्तः सुलभम्
- (iii) उर्च्यैः वाह्यः
- (iv) दुर्लभम् उपारी

प्र०-७ त्रि-न कस्यि पदं चिनुत।

- (I) जलचरः, खैचरः, भ्रूचरः, निशाचरः  
(II) मधुराः, चटकाः, शुकाः, मण्डूकाः  
(III) वैखनी, पुस्तिका, अद्यापिका, अजा

प्र०-८ विलोमपदानि

उन्नतः	प्राथित्याम्
गगने	असुन्दरः
सुन्दरः	अवनतः
चित्वा	शीकः
दुःखी	बिभीर्य
दृषः	सुखी

प्र०-९ पर्यायवाची पदानि

(i) गगनू	जलदः
(ii) विमले	निशाकरः
(iii) चन्द्रः	आकाशे
(iv) सूर्यः	निर्मले
(v) अम्बुदः	दिवाकरः

प्र०-१० मण्डूपातः पुल्लिङ्ग - स्त्रीलिङ्ग नपुंसकलिङ्गपदानि चिन्वा चि

विद्या, धनम्, संस्कृता, सततम्, कुसुमम्, मूर्धजा, पशु, गुरुः  
कान्त

प्र०-११ वर्ण-विभाजन

1. विद्यालय
2. चटकाः



प्रश्न-12 संख्यावाची -  
56, 98, 75, 88

प्रश्न-13 रंगों के नाम संस्कृत में लिखें।



प्रश्न-14 सार्वजनों के नाम संस्कृत में लिखें।

प्रश्न-15 फलों के नाम संस्कृत में लिखें।

प्रश्न-16 सांघि विच्छेद

- (i) विद्यालय
- (ii) नरन्ड
- (iii) कलेश

प्रश्न-17 संख्यावाची शब्दः।



## **Computer Activity**

**Class - 7** : Search information on viruses and other threats , responsible and safe use of internet and  
create a power point presentation on it.

<https://www.slideshare.net/mobile/a4azri/virus-computer-security-threats>

<https://www.slideshare.net/mobile/acarrizales531/computer-safety-68345477>

संत निरंकारी पब्लिक स्कूल {गोविंद पुरी }

विषय -हिन्दी

कक्षा - सातवीं

{कार्य -प्रपत्र }

नाम: \_\_\_\_\_

तिथि:3-4-2020 से 8-4-2020

प्रश्न-1 नीचे दी गई कहानी को पढ़िए और निम्न प्रश्नों के उत्तर दीजिये -----

विदुर ने अवसर देखकर युधिष्ठिर से पूछा, "वत्स, यदि जंगल में भीषण आग लग जाये, तो जंगल के कौन से जानवर सुरक्षित रहेंगे ?"

युधिष्ठिर ने उत्तर दिया, \* "तात, जंगल में आग लगने पर, स्वछंद और निर्भय घूमने वाले, शेर चीते, हाथी और सबसे तेज भागने वाले हिरण आदि सारे जानवर, जंगल की आग में जलकर राख हो जायेंगे। परन्तु बिलों में रहने वाले चूहे सुरक्षित रहेंगे। दावानल के शांत होने पर वो पुनः बिलों से बाहर निकल कर, शांतिपूर्ण जीवन व्यतीत करेंगे।"

"वत्स युधिष्ठिर, तुम्हारे उत्तर से मैं निश्चिंत हुआ। मेरी समस्त चिंतायें दूर हुईं।

जाओ, सुरक्षित रहो। यशस्वी भव।" विदुर ने आशीर्वाद दिया।

कोरोना वायरस भी एक भयानक आग के समान है, जो लगातार सारी सीमायें लांघ रहा है। जो लोग अपने घरों में रहेंगे, वो सुरक्षित रहेंगे और दुनिया पर राज करेंगे।

इसीलिए अपने घरों में दुबके रहिए

(क) विदुर ने युधिष्ठिर से क्या प्रश्न किया ?

---

---

---

(ख) कौन से जानवर जंगल की आग में जल जाएंगे और कौन से जीवित रहेगे ?

---

---

---

(ग) इस कहानी का उद्देश्य क्या है ?

---

---

(घ) निम्न शब्दों के दो-दो पर्यायवाची शब्द लिखिए -----

\*जंगल -----

\*आग -----

\*घर -----

प्रश्न 2-निम्न मुहावरों और लोकोक्तियों के वाक्य प्रयोग कीजिये ?

1 अब पछताए होत क्या जब चिड़िया चुग गई खेत

---

2 घर की मुर्गी दाल बराबर

---

3 इसकी टोपी उसके सिर

---

4 नाक मुँह सिकोड़ना

---

5 ऊँट के मुँह में जीरा

---

6 जिसकी लाठी उसकी भैंस

---

7 ईद का चाँद

---

8 पानी में रहकर मगरमच्छ से बैर

---

9 बंदर क्या जाने अदरक का स्वाद

---

10 जंगल में मोर नाचा किसने देखा

---

प्रश्न 3 COVID 19 ( कोरोना वाइरस) पर एक अनुच्छेद लिखिए।

प्रश्न 4 कोरोना वाइरस को लेकर दो मित्रों के बीच संवाद लिखिए।

प्रश्न 5 कोरोना वाइरस के बचाव के निर्देशों पर सुंदर विज्ञापन तैयार कीजिए।

प्रश्न 6 डी ,डी नेशनल चैनल दूरदर्शन पर रामायण और महाभारत के सीरियल दिखाये जा रहे हैं आप इन सीरियल्स को देखिये और इनके महत्वपूर्ण चरित्रों के बारे में अपने शब्दों में लिखें ?