

**SANT NIRANKARI PUBLIC SCHOOL ,GOVIND PURI**

**ASSIGNMENT-1, Date: 03.04.2020 - 08.04.2020**

**SUBJECT-EVS**

**CLASS -II**

**NAME \_\_\_\_\_ DATE \_\_\_\_\_ ROLL NO. \_\_\_\_\_**

**Kindly follow the instructions given below.**

**1.Don't go outside to take the printout. Just copy the assignment from the android phone.**

**2.Do the assignment from the stationary available at home like rough notebbok.**

**3.It is mandatory to do all the assignments as you all have scored on the basis of this.**

**4.Don't panic keep yourself safe and healthy.**

**5.Eat healthy food, be safe and happy**

**Q1 Fill in the blanks**

Smell	taste	see	hear	feel
-------	-------	-----	------	------

1. I can.....different shapes.
2. I can .....sweets.
3. I can.....hot milk.
4. I can.....sweet fragrance of flowers.
5. I can.....soft music.

**Q2.Name the following**

1.Four eatables made from milk

.....  
.....

2.Four vegetables you like to eat

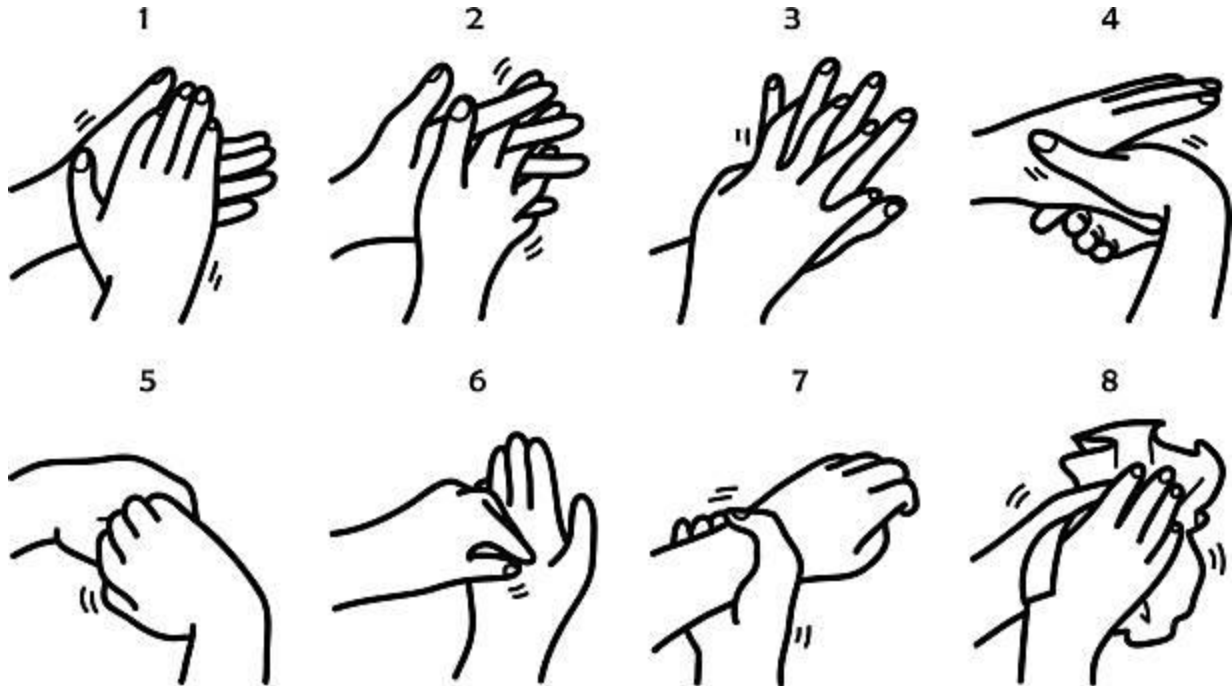
.....  
.....

3.Four fruits you like to eat


.....  
.....

Q3 Color the picture.

LET'S LEARN TO WASH HANDS TO KILL GERMS



Write a slogan on Hand Wash



**Q4. Draw the picture of your home. Name the things you see at your home.**

- **What are the few words that describe your home.**

---

- **Write a sentence on what you like to do the most when you are at your home.**

---

**Q5. Myself**



Glue a photo or make a drawing of yourself.

I am ... years old. I have \_\_\_\_\_ hair  
and \_\_\_\_\_ eyes.

My birthday is on \_\_\_\_\_ the \_\_\_\_\_.

I have ... brothers and ... sisters.

My favourite subject in school is \_\_\_\_\_.

#### A FEW MORE OF MY FAVOURITE THINGS

Color: \_\_\_\_\_ Animal: \_\_\_\_\_

Food: \_\_\_\_\_ Sport: \_\_\_\_\_

Game: \_\_\_\_\_ Book: \_\_\_\_\_

Film: \_\_\_\_\_ Song: \_\_\_\_\_

Date: 03.04.2020 - 08.04.2020

CLASS II  
SUBJECT- ENGLISH

NAME \_\_\_\_\_ DATE \_\_\_\_\_ ROLL NO. \_\_\_\_\_

**Q-1 Read the passage and answer the following questions.**

**BOB THE FROG**

Bob is a frog. He is green with yellow spots. He has a long sticky tongue that he uses to catch flies. He lives near a pond. Sometimes he goes into the water and sometimes he stays on the land. Bob has strong legs that he uses to hop. When Bob was a little baby he was called a tadpole.

i. What is Bob ?

\_\_\_\_\_

ii. What color is Bob?

\_\_\_\_\_

iii. What sort of tongue does Bob have?

\_\_\_\_\_

iv. What was Bob called when he was little?

\_\_\_\_\_

**Q-2.Talk to your parents about Covid-19.Collect and paste pictures of five countries vastly affected by Corona Virus. Do it on an A3 colorful sheet.**

**Q-3 .Read the following sight words and frame sentences taking one word from each row.**

The pig	has	all the	icecream
My father	affected	a	phone
My brother	like to eat	an	countries
Corona	went	in a	market
I	hid	to the	pit

For eg :The pig hid in a pit.

**Q-4 Write any two describing words for each noun.**

Eg:mother	beautiful	caring
Table		
Taj Mahal		
Peacock		
Ball		
Man		

**Q-5.Fill in the blanks with is,am or are.**

- a. I \_\_\_\_\_ very hungry.
- b. She \_\_\_\_\_ my friend.
- c. We \_\_\_\_\_ going to the market.
- d. He \_\_\_\_\_ an old man.
- e. You \_\_\_\_\_ my neighbour.
- f. They \_\_\_\_\_ my parents.


**ASSIGNMENT-1 (2020-21)**

**03/04/2020 – 08/04/2020**

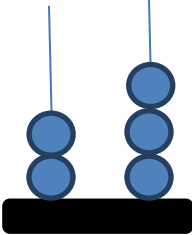
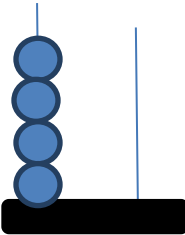
**CLASS II**

**SUBJECT : MATHS**

**Q1. Fill in the blanks :-**

- i. The largest 2 digit number is \_\_\_\_\_.
- ii.  $63 + 14 =$  \_\_\_\_\_
- iii.  $9 + 9 + 9 + 9 =$  \_\_\_\_\_  $\times 9$
- iv. Count the number of  - \_\_\_\_\_
- v. Write the numeral of EIGHTY FOUR - \_\_\_\_\_

**Q2. Write the number as shown by the abacus:-**

- i. 
- ii. 






**Q3. Write the missing numbers:-**

- i. 234, 235, \_\_\_\_\_, \_\_\_\_\_
- ii. \_\_\_\_\_, 402, \_\_\_\_\_, 404

**Q4. Circle the largest number:-**

- i. 90, 78, 100, 45, 5
- ii. 5, 9, 17, 2, 10

**Q5. Study the given table and answer the following question:-**



DAYS	NO. OF STARS
Sunday	
Monday	
Tuesday	
Wednesday	
Thursday	

i. On which day the stars are maximum - \_\_\_\_\_

ii. On which day the stars are minimum - \_\_\_\_\_

**Q6. Add-**

i.

T	O
	
4	4
+ 2	8
_____	_____

ii.



T	O
6	0
+ 2	5
_____	_____

**Q7. Subtract-**

i.

T	O
7	8
- 2	2
_____	_____

ii.

T	O
	
4	5
- 2	9
_____	_____

संत निरंकारी पब्लिक स्कूल (गोविंद पुरी )

विषय : हिन्दी

कक्षा: दूसरी

कार्य प्रपत्र

नाम: \_\_\_\_\_

तिथि: 3-04-2020 से 8-04-2020

प्र:1) ऐसे पाँच जानवरो के नाम बताओ जिनकी लंबी पूंछ होती है ?

उत्तर: .....  
.....  
.....

प्र:2) निम्न संख्याओं को हिंदी में लिखों-

12 ..... 18 .....

13 ..... 20 .....

प्र:3) सही मिलान करो :-

बाल कटवाने	दर्जी
कपड़े सिलवाने	डेयरी
दूध लेने	नाई
पढ़ने	अध्यापक

प्र:4) "आ " की मात्रा के दो शब्द लिखिए।

1. \_\_\_\_\_

2. \_\_\_\_\_

प्र:5) एक से अनेक लिखों -

चूहा ..... बच्चा .....

तोता ..... बेटा .....



प्र:6) निम्न वर्णों से शुरू होने वाले दो-दो शब्द लिखों-

म .....  
स .....  
न .....  
ह .....

प्र:7) तुकान्त शब्दों का सही मिलान करो -

चोटी	बच्चा
सच्चा	पीला
नीला	छोकरी
टोकरी	खोटी

प्र:8)सुलेख लिखों-

नाई ने एक पूँछ काट दी | अब उसके पास बची सिर्फ छह पूँछे | अगले दिन जैसे ही चूहा बाहर निकला , सब उसे फिर से चिढ़ाने लगे |

.....  
.....  
.....  
.....  
.....